

Total No. of Printed Pages : 17

(DO NOT OPEN THIS QUESTION BOOKLET BEFORE TIME OR UNTIL YOU ARE ASKED TO DO SO)

A

SET-Y

M.Phil./Ph.D./URS-EE-Nov.-2018

SUBJECT : Computer Science

100017

Sr. No. ....

Time : 1¼ Hours

Max. Marks : 100

Total Questions : 100

Roll No. (in figures) \_\_\_\_\_ (in words) \_\_\_\_\_

Name \_\_\_\_\_ Father's Name \_\_\_\_\_

Mother's Name \_\_\_\_\_ Date of Examination \_\_\_\_\_

\_\_\_\_\_  
(Signature of the Candidate)

\_\_\_\_\_  
(Signature of the Invigilator)

**CANDIDATES MUST READ THE FOLLOWING INFORMATION/INSTRUCTIONS BEFORE STARTING THE QUESTION PAPER.**

- 1. All questions are compulsory.**
- The candidates **must return** the question booklet as well as OMR Answer-Sheet to the Invigilator concerned before leaving the Examination Hall, failing which a case of use of unfair-means / misbehaviour will be registered against him / her, in addition to lodging of an FIR with the police. Further the answer-sheet of such a candidate will not be evaluated.
- Keeping in view the transparency of the examination system, carbonless OMR Sheet is provided to the candidate so that a copy of OMR Sheet may be kept by the candidate.
- Question Booklet along with answer key of all the A, B, C & D code will be got uploaded on the university website after the conduct of Entrance Examination. In case there is any discrepancy in the Question Booklet/Answer Key, the same may be brought to the notice of the Controller of Examination in writing/through E.Mail within 24 hours of uploading the same on the University Website. Thereafter, no complaint in any case, will be considered.
- The candidate **must not** do any rough work or writing in the OMR Answer-Sheet. Rough work, if any, may be done in the question booklet itself. Answers **must not** be ticked in the question booklet.
- There will be no negative marking. Each correct answer will be awarded one full mark. Cutting, erasing, overwriting and more than one answer in OMR Answer-Sheet will be treated as incorrect answer.**
- Use only **Black** or **Blue Ball Point Pen** of good quality in the OMR Answer-Sheet.
- Before answering the questions, the candidates should ensure that they have been supplied correct and complete booklet. Complaints, if any, regarding misprinting etc. will not be entertained 30 minutes after starting of the examination.**

M.Phil./Ph.D./URS-EE-Nov.-2018/(Computer Sci.)(SET-Y)/(A)

1. Let  $P, Q$  and  $R$  be three atomic propositional assertions. Let  $X$  denote  $(P \vee Q) \rightarrow R$  and  $Y$  denote  $(P \rightarrow R) \vee (Q \rightarrow R)$ . Which one of the following is a tautology ?  
 (1)  $X \leftrightarrow Y$                       (2)  $Y \rightarrow X$                       (3)  $X \rightarrow Y$                       (4)  $\sim Y \rightarrow X$
2. Which one of the following well-formed formulae in predicate calculus is *not* valid ?  
 (1)  $(\forall x p(x) \Rightarrow \forall x q(x)) \Rightarrow (\exists x \sim p(x) \vee \forall x q(x))$   
 (2)  $(\exists x p(x) \vee \exists x q(x)) \Rightarrow \exists x (p(x) \vee q(x))$   
 (3)  $\exists x (p(x) \wedge q(x)) \Rightarrow (\exists x p(x) \wedge \exists x q(x))$   
 (4)  $\forall x (p(x) \vee q(x)) \Rightarrow (\forall x p(x) \vee \forall x q(x))$
3. Akshay speaks the truth in 45% of the cases. In a rainy season, on each day there is a 75% chance of raining. On a certain day in the rainy season, Akshay tells his mother that it is raining outside. What is the probability that it is actually raining ?  
 (1)  $\frac{27}{38}$                       (2)  $\frac{25}{35}$                       (3)  $\frac{31}{36}$                       (4)  $\frac{52}{128}$
4. Two  $n$  bit binary strings  $S_1$  and  $S_2$  are chosen randomly with uniform probability. The probability that Hamming distance between these strings (the number of bit positions where the two strings differ) is equal to  $d$  is :  
 (1)  $\frac{{}^n C_d}{2^n}$                       (2)  $\frac{{}^n C_d}{2^d}$                       (3)  $\frac{d}{2^n}$                       (4)  $\frac{1}{2^d}$
5.  $f(x)$  and  $g(x)$  are two functions differentiable in  $[0, 1]$  such that  $f(0) = 2; g(0) = 0; f(1) = 6; \text{ and } g(1) = 2$ . Then these must exist a constant  $C$  in :  
 (1)  $(0, 1)$  such that  $f'(c) = 2g'(c)$                       (2)  $[0, 1]$  such that  $f'(c) = 2g'(c)$   
 (3)  $(0, 1)$  such that  $2f'(c) = g'(c)$                       (4)  $[0, 1]$  such that  $2f'(c) = g'(c)$
6.  $(G, *)$  is an abelian group. Then :  
 (1)  $x = x^{-1}$ , for any  $x$  belonging to  $G$   
 (2)  $x = x^2$ , for any  $x$  belonging to  $G$   
 (3)  $(x * y)^2 = x^2 * y^2$ , for any  $x, y$  belonging to  $G$   
 (4)  $G$  is of finite order
7. The number of equivalence relations of the set  $\{1, 2, 3, 4\}$  is :  
 (1) 15                      (2) 16                      (3) 24                      (4) 4
8. In a set of integers, a relation  $R$  is defined as  $aRb$ , if and only if  $b = |a|$ . This relation is :  
 (1) Reflexive                      (2) Irreflexive                      (3) Symmetric                      (4) Anti-symmetric

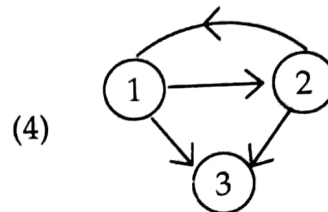
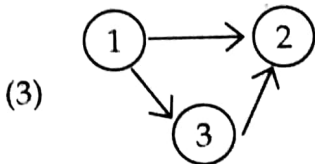
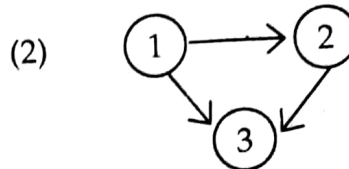
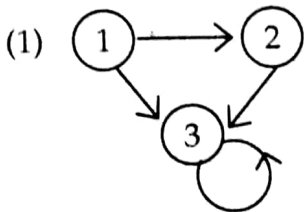
9. Which of the following statements is true ?

P : All totally ordered sets have least elements.

Q : The Hasse diagram of a totally ordered set is a line.

- (1) P alone                      (2) Q alone                      (3) Both P and Q                      (4) Neither P nor Q

10. Let  $M$  be a  $3 \times 3$  adjacency matrix corresponding to a given graph of three nodes labeled 1, 2, 3. If entry (1, 3) in  $M^3$  is 2, then the graph could be :



11. A wheel graph with eleven vertices has a chromatic number of :

- (1) 3                      (2) 4                      (3) 2                      (4) None of these

12. Which of the following is a correct match ?

**List-I**

**List-II**

(i) Circuit

(a) There exists a path between every distinct pair of vertices

(ii) Connected graph

(b) A path that contains every edge of a graph exactly once

(iii) Euler Path

(c) A graph that can be drawn in a plane with no crossing

(iv) Planar Graph

(d) A path that begins and ends at the same vertex

(1) (i) - (b), (ii) - (c), (iii) - (d), (iv) - (a)                      (2) (i) - (d), (ii) - (b), (iii) - (a), (iv) - (c)

(3) (i) - (d), (ii) - (a), (iii) - (b), (iv) - (c)                      (4) None of these

13. Which one of the following is the minimum error code ?

- (1) Octal code                      (2) Gray code                      (3) Binary code                      (4) Excess-3 code

14. The minimum number of NAND gates required to implement  $A \oplus B \oplus C$  is :

- (1) 8                      (2) 10                      (3) 9                      (4) 6

15. How many 2-input multiplexes are required to construct a  $2^{10}$ -input multiplexer ?  
 (1) 31 (2) 10 (3) 127 (4) 1023
16. How many 3-to-8 line decoders with an enable input are needed to construct a 6-to-64 line decoder without using any other logic gates ?  
 (1) 7 (2) 8 (3) 9 (4) 10
17. The values of  $x$  and  $y$ , if  $(x567)_8 + (2yx5)_8 = (71yx)_8$  is :  
 (1) 4, 3 (2) 3, 3 (3) 4, 4 (4) 4, 5
18. A computer uses a floating-point representation comprising a signed magnitude fractional mantissa and an excess-16 base-8 exponent. What decimal number is represented by a floating-point number whose exponent is 10011, mantissa 101000, and the sign bit set ?  
 (1) - 6250 (2) -20480 (3) - 320 (4) - 0.00122
19. The following program fragment in C  
`for (i = 3); i < 15; i += 3);`  
`printf("%d", i);`  
 results in :  
 (1) a syntax error (2) an execution error  
 (3) printing of 12 (4) printing of 15
20. The body of the following for loop  
`for (putchar ('a'); putchar(0); putchar('c'))`  
`putchar ('b');`  
 will be executed :  
 (1) 0 times  
 (2) 1 times  
 (3) Infinitely many times  
 (4) will not be executed because of syntax error
21. `main( )`  
`{`  
`int a = 5, b = 2;`  
`printf("%d", a+++b);`  
`}`  
 (1) results in syntax error (2) prints 7  
 (3) prints 8 (4) prints 5

22. The following program

```
main()  
{  
    int abc ();  
    abc ();  
    (*abc) ();  
}  
  
int abc ()  
{ printf ("come"); }
```

- (1) results in a completion error                      (2) prints come  
(3) prints come come                                      (4) results in a run time error

23. What does the following program print ?

```
# include <stdio.h>  
main()  
{  
    inc (); inc (); inc ();  
}  
  
inc ()  
{  
    static int x;  
    printf ("%d", ++x);  
}
```

- (1) 012  
(2) 123  
(3) prints 3 consecutive, but unpredictable numbers  
(4) prints 111

24. The expression  $4 + 6 / 3 * 2 - 2 + 7 \% 3$  evaluates to :

- (1) 3                      (2) 4                      (3) 6                      (4) 7

A

25. The following program fragment :

```
int i = 10;
void main ( )
{
    int i = 20;
    {
        int i = 30;
        cout << i << :: i;
    }
}
```

- (1) prints 3010 (2) prints 3020  
(3) will result in a run time error (4) None of the above

26. The statements

```
int a = 5;
cout << "FIRST" >> (a << 2) << "SECOND";
```

outputs :

- (1) FIRST 52 SECOND (2) FIRST 20 SECOND  
(3) SECOND 25 FIRST (4) an error message

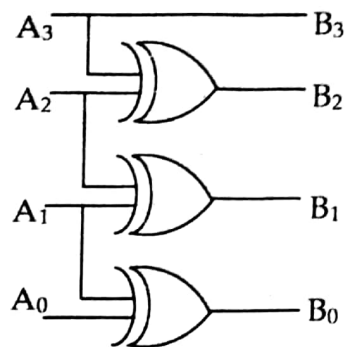
27. Which of the following is not a storage class supported by C++ ?

- (1) Register (2) Auto (3) Mutable (4) Dynamic

28. C front :

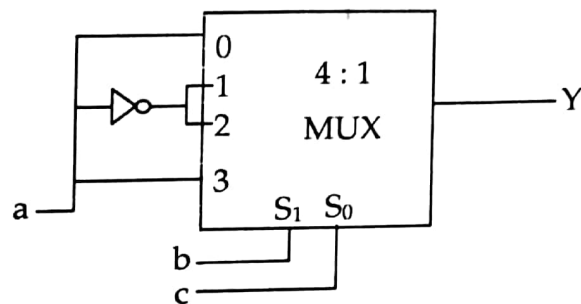
- (1) is the front end of a C compiler  
(2) is the preprocessor of a C compiler  
(3) is a tool that translates a C++ code to its equivalent C code  
(4) none of the above

29. The circuit is used to convert one code to another. Identify it :



- (1) Binary to Gray (2) Gray to Binary  
 (3) Gray to XS-3 (4) Gray to 8421

30. the following multiplexer circuit is equal to :

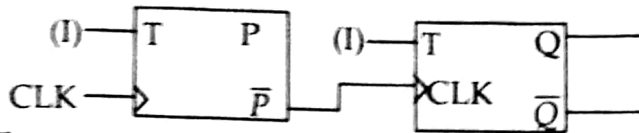


- (1) Implementation of sum equation of full adder  
 (2) Implementation of carry equation of full adder  
 (3) Implementation of borrow equation of full subtractor  
 (4) All of the above

the output of the multiplexer shown below is :

32. A 4-bit MOD-16 ripple counter uses JK flip-flops. If the propagation delay of each flip-flop is 50 ns sec, the maximum clock frequency that can be used is equal to :  
 (1) 2 MHz                      (2) 3 MHz                      (3) 5 MHz                      (4) 20 MHz

33. For a given counter identify its behaviour :



The output is taken from PQ

- (1) MOD-4 up counter                      (2) MOD-2 down counter  
 (3) MOD-4 down counter                      (4) MOD-2 up counter
34. Consider the following two tables  $T_1$  and  $T_2$

P	Q	R
11	a	6
16	b	9
26	a	7

A	B	C
11	b	7
26	c	4
11	b	6

What is the number of tuples present in the result of algebraic expression ?

$$T_1 \bowtie_{(T_1.P = T_2.A)} T_2$$

- (1) 2                      (2) 3                      (3) 4                      (4) 5
35. Suppose  $R_1(A, B)$  and  $R_2(C, D)$  are two relation schemas. Let  $R_1$  and  $R_2$  be the corresponding relation instances. B is a foreign key that refers to C in  $R_2$ . If data in  $R_1$  and  $R_2$  satisfy referential integrity constraints, which of the following is true ?
- (1)  $\prod_B (R_1) - \prod_C (R_2) = \phi$                       (2)  $\prod_C (R_2) - \prod_B (R_1) = \phi$   
 (3)  $\prod_B (R_1) - \prod_C (R_2) \neq \phi$                       (4) Both (1) and (2)
36. The number of entities participating in the relationship is known as :  
 (1) Maximum cardinality                      (2) Composite identifiers  
 (3) Degree                      (4) None



37. Which one is correct ?

- (1) Primary Key  $\subset$  Super Key  $\subset$  Candidate Key
- (2) Candidate Key  $\subset$  Super Key  $\subset$  Primary Key
- (3) Super Key  $\subset$  Primary Key  $\subset$  Candidate Key
- (4) Primary Key  $\subset$  Candidate Key  $\subset$  Super Key

38. For the given tables

A		B
X	Y	Y
a <sub>1</sub>	b <sub>1</sub>	b <sub>1</sub>
a <sub>2</sub>	b <sub>1</sub>	b <sub>2</sub>
a <sub>2</sub>	b <sub>2</sub>	
a <sub>1</sub>	b <sub>2</sub>	

$A \div B$  will return :

- (1) a<sub>1</sub>, a<sub>2</sub>
- (2) a<sub>1</sub>
- (3) a<sub>2</sub>
- (4) None of these

39. Consider the join of a relation  $A$  with a relation  $B$ . If  $A$  has  $m$  tuples and  $B$  has  $n$  tuples, then the maximum and minimum sizes of the join respectively are :

- (1)  $mn$  and  $m + n$
- (2)  $(m + n)$  and  $(m - n)$
- (3)  $mn$  and  $m$
- (4)  $mn$  and  $0$

40. Which one is **not** a query language ?

- (1) SQL
- (2) QBE
- (3) My SQL
- (4) Data log

41. Consider the given relation and functional dependencies  $R(ABC)$

$$FD = (AB \rightarrow C, C \rightarrow A)$$

The relation is in which normal form ?

- (1) 1 NF
- (2) 2 NF
- (3) 3 NF
- (4) BCNF

42. Consider the given functional dependencies :

$$AB \rightarrow CD$$

$$AF \rightarrow D$$

$$DE \rightarrow F$$

$$C \rightarrow G$$

$$F \rightarrow E$$

$$G \rightarrow A$$

Which one of the following is false ?

- (1)  $\{CF\}^+ = \{ACDFEG\}$
- (2)  $\{BG\}^+ = \{ABCDG\}$
- (3)  $\{AB\}^+ = \{ABCDG\}$
- (4)  $\{AF\}^+ = \{ACDEFG\}$

A

43. The maximum number of superkeys for the relation schema  $R(E, F, G, H)$  with  $E$  as the key is :
- (1) 6                      (2) 7                      (3) 8                      (4) 9
44. A hash function  $f$  defined as  $f(\text{key}) = \text{key} \bmod 7$ , with linear probing, is used to insert the keys 37, 38, 72, 48, 98, 11, 56 into a table indexed from 0 to 6. What will be the location of key 11 ?
- (1) 5                      (2) 6                      (3) 4                      (4) 3
45. Consider the following :
- Block size = 1025 bytes  
 Record length in data file = 100 bytes  
 Total number of records = 30000  
 Search key = 9 bytes  
 Pointer = 6 bytes
- What is the number of index blocks ?
- (1) 44                      (2) 45                      (3) 46                      (4) None
46. A file is organized so that the ordering of data records is the same as or close to the ordering of data entries in some index. Then that index is called ?
- (1) Dense                      (2) Sparse                      (3) Clustered                      (4) Unclustered
47.  $B^+$  trees are considered BALANCED because :
- (1) The lengths of the paths from the root to all leaf nodes are all equal  
 (2) The lengths of the paths from the root to all leaf nodes differ from each other by at most 1  
 (3) The number of children of any two non-leaf sibling nodes differ by at most 1  
 (4) The number of records in any two leaf nodes differ by at most 1
48. For merging two sorted lists of sizes  $m$  and  $n$  into a sorted list of size  $m + n$ , we require comparisons of :
- (1)  $O(m)$                       (2)  $O(n)$                       (3)  $O(m + n)$                       (4)  $O(\log(m) + \log(n))$
49. A binary tree has  $n$  leaf nodes. The number of nodes of degree 2 in this tree is :
- (1)  $\log_2 n$                       (2)  $n - 1$                       (3)  $n$                       (4)  $2^n$

50. A binary search tree contains the values 1, 2, 3, 4, 5, 6, 7 and 8. The tree is traversed in preorder and the values are printed out. Which of the following sequences is a valid output ?

- (1) 53124786      (2) 53126487      (3) 53241678      (4) 53124768

51. Consider the grammar

$$S \rightarrow a$$

$$S \rightarrow ab$$

The given grammar is :

- (1) LR (1) only      (2) LL (1) only  
 (3) Both LR (1) and LL (1)      (4) LR (1) but not LL (1)

52. The FIRST and FOLLOW sets for the grammar :

$$S \rightarrow SS + | SS^* | a$$

- (1) FIRST(S) = {a}      (2) FIRST(S) = {+}  
 FOLLOW(S) = {+, \*, \$}      FOLLOW(S) = {+, \*, \$}  
 (3) FIRST(S) = {a}      (4) FIRST(S) = {+, \*}  
 FOLLOW(S) = {+, \*}      FOLLOW(S) = {+, \*, \$}

53. YACC builds up :

- (1) SLR passing table  
 (2) Canonical LR passing table  
 (3) LALR passing table  
 (4) None of these

54. Resolution of externally defined symbols is performed by a :

- (1) Linker      (2) Loader      (3) Compiler      (4) Interpreter

55. Consider the grammar :

$$S \rightarrow (S) | a$$

Let the number of states in SLR(1), LR(1) and LALR(1) passes for the grammar be  $n_1$ ,  $n_2$  and  $n_3$  respectively. The following relationship holds good :

- (1)  $n_1 < n_2 < n_3$       (2)  $n_1 = n_3 < n_2$       (3)  $n_1 = n_2 = n_3$       (4)  $n_1 \geq n_3 \geq n_2$

A

56. Consider the following Syntax Directed Translation Scheme (SDTS) with non-terminals  $\{S, A\}$  and terminals  $\{a, b\}$

$S \rightarrow aA$  {print 1}

$S \rightarrow a$  {print 2}

$A \rightarrow Sb$  {print 3}

Using the above SDTS, the output printed by a bottom-up parser, for the input  $aab$  is :

- (1) 132                      (2) 223                      (3) 231                      (4) Syntax error

57. Replacing the expression  $2 * 3.14$  by  $6.28$  is :

- (1) Constant folding                      (2) Induction variable  
(3) Strength reduction                      (4) Code reduction

58. The evaluation strategy which delays the evaluation of an expression until its value is needed and which avoids repeated evaluations is :

- (1) Early evaluation                      (2) Late evaluation  
(3) Lazy evaluation                      (4) Critical evaluation

59. In a two pass assembler the pseudo-code EQU is to be evaluated during :

- (1) pass 1                      (2) pass 2  
(3) not evaluated by the assembler                      (4) None of the above

60. A compiler-compiler is a :

- (1) compiler which compiles a compiler program  
(2) software tool used in automatic generation of a compiler  
(3) compiler written in the same language it compiles  
(4) another name for cross compiler

61. Which of the following system software resides in main memory always ?

- (1) Text editor                      (2) Assembler                      (3) Linker                      (4) Loader

62. Which of the following UNIX tools receives input only from the standard input ?

- (1) awk                      (2) grep                      (3) sed                      (4) tr

63. The CC command makes a total of :

- (1) 1 pass                      (2) 2 passes                      (3) 4 passes                      (4) 5 passes

64. The following C program

```
main()  
{  
    fork (); fork (); printf ("yes");  
}
```

prints yes :

- (1) only once      (2) twice      (3) 4 times      (4) 8 times
65. Which of the following calls never returns an error ?
- (1) getpid      (2) fork      (3) ioctl      (4) open
66. The following sequence of commands `grep x * . c > mn &`  
`wc -l mn&`  
`rm mn&`  
produces the same result as the single command :
- (1) `grep x * . c | wc -l`      (2) `wc -l < grep x * . c`  
(3) `grep x *.c > wc -l`      (4) None of the above
67. A process refers to 5 pages A, B, C, D and E in the order A; B; C; D; A; B; E; A; B; C; D; E. If the page replacement is FIFO, the number of pages which transfer with an empty internal store of 3 frames is :
- (1) 8      (2) 10      (3) 9      (4) 7
68. Which of the following is FALSE ?
- (1) User level threads are not scheduled by the Kernel  
(2) When a user level thread is blocked, all other threads of its processes are blocked  
(3) Context switching between user level threads is faster than context switching between Kernel level threads  
(4) Kernel level threads cannot share the code segment

69. A shared variable  $x$ , initialized to 0, is operated on by four concurrent processes  $W$ ,  $X$ ,  $Y$ ,  $Z$  as follows :
- Each of the processes  $W$  and  $X$  reads  $x$  from memory, increments by one, stores it to memory, and then terminates. Each of the processes  $Y$  and  $Z$  reads  $x$  from memory, decrements by two, stores it to memory, and then terminates. Each process before reading  $x$  invokes the  $P$  operation (i.e. wait) on a counting semaphore  $S$  and invokes the  $V$  operation (i.e. signal) on the semaphore  $S$  after storing  $x$  to memory. Semaphore  $S$  is initialized to 2.
- What is the maximum possible value of  $x$  after all processes complete execution ?
- (1) -2                      (2) -1                      (3) 1                      (4) 2
70. To avoid the race condition, the number of processes allowed in critical section is :
- (1) 0                      (2) 1                      (3) 2                      (4) 3
71. Semaphore operations are atomic because they are implemented within the ..... :
- (1) Kernel                      (2) Shell  
(3) User process                      (4) Normal process space
72. Which of the following scheduling algorithms could result in saturation ?
- (1) First Come First Served                      (2) Shortest Job First  
(3) Round Robin                      (4) Highest Response Ratio Next
73. The maximum number of processes that can be in ready state for a computer system with  $n$  CPUs is :
- (1)  $n$                       (2)  $n^2$                       (3)  $2^n$                       (4) Independent of  $n$
74. In which of the following page replacement policies, Belady's anomaly may occur ?
- (1) FIFO                      (2) Optimal                      (3) LRU                      (4) MRU
75. Maximum data rate of channel for a noiseless 3-KHz binary channel is :
- (1) 3000 bps                      (2) 6000 bps                      (3) 1500 bps                      (4) None of the above
76. The Hamming distance between 001111 and 010011 is :
- (1) 1                      (2) 2                      (3) 3                      (4) 4
77. There are 5 routers and 6 networks in an interworking, using link state routing, how many routing tables are there ?
- (1) 1                      (2) 5                      (3) 6                      (4) 11

78. Congestion control for multicasting flows from multiple sources to multiple destinations, the solution that can handle this is :
- (1) RSVP (2) Load shedding  
(3) Both (1) and (2) (4) None of these
79. Which one of the following protocols is *not* used to resolve one form of address to another one ?
- (1) DNS (2) ARP (3) DHCP (4) RARP
80. Consider the given IP address 156.216.24.65 with a subnet mask of 7-bits, what are the number of hosts and subnets ?
- (1) 512, 128 (2) 510, 126 (3) 511, 127 (4) 509, 125
81. In an encryption scheme that uses RSA, values for  $p$  and  $q$  are selected to be 5 and 7 respectively. What could be the value of  $d$  ?
- (1) 12 (2) 3 (3) 11 (4) 9
82. What is the size of key in triple DES ?
- (1) 168 bits (2) 112 bits (3) 56 bits (4) Either (1) or (2) or (3)
83. Which one of the following is *not* desired in a good SRS document ?
- (1) Functional requirements (2) Non-functional requirements  
(3) Goals of implementation (4) Algorithms for software implementation
84. According to Brooks, adding more people to an already late software project makes it :
- (1) late (2) fast  
(3) does not impact schedule (4) None of the above
85. For a real time software the KLOC is 28.2, what is the effort in person month calculated by using basic COCOMO model ?
- (1) 146 (2) 198 (3) 220 (4) 248
86. Register renaming is done in pipelined processors :
- (1) as an alternative to register allocation at compile time  
(2) for efficient access to function parameters and local variables  
(3) to handle certain kinds of hazards  
(4) as part of address translation
87. EDI over Internet uses :
- (1) MIME to attach EDI forms to e-mail messages  
(2) FTP to send business forms  
(3) HTTP to send business forms  
(4) SGML to send business forms

A

88. In electronic cash payment :
- (1) A debit card payment system is used
  - (2) A credit card payment system is used
  - (3) RSA cryptography is used in transactions
  - (4) A customer buys several electronic coins which are digitally signed by coin issuing bank
89. Commonly used mode for 3G networks is :
- (1) TDMA
  - (2) FDMA
  - (3) FDD
  - (4) TDD
90. The shape of the cellular region for maximum radio coverage is :
- (1) Circular
  - (2) Square
  - (3) Oval
  - (4) Hexagon
91. Traffic intensity is expressed in :
- (1) Erlangs
  - (2) Erlangs/MHz/km
  - (3)  $\lambda$ /sec
  - (4) dB/sec
92. Guard band is ?
- (1) The channel spectrum
  - (2) The bandwidth allotted to signal
  - (3) The small unused bandwidth between the frequency channels to avoid interference
  - (4) The spectrum acquired by the noise between signals
93. OLE stands for :
- (1) Open Linking and Embedding
  - (2) Objective Linking and Embedding
  - (3) Object Linking and Embedding
  - (4) Open Link and End
94. What does ERP stand for ?
- (1) Expanse Research Project
  - (2) Enterprise Resource Planning
  - (3) Enterprise Research Planning
  - (4) Expanse Resource Project



95. Identify the correct sequence in which the following packets are transmitted on the network by a host when a browser requests a webpage from a remote server, assuming that the host has just been restarted ?
- (1) HTTP GET request, DNS query, TCP SYN
  - (2) DNS query, HTTP GET request, , TCP SYN
  - (3) TCP SYN, DNS query, HTTP GET request
  - (4) DNS query, TCP SYN, HTTP GET request
96. Standard protocols like HTTP, SMTP, MNTP are part of :
- (1) Presentation layer
  - (2) Application layer
  - (3) Session layer
  - (4) Not part of any layer
97. The representation of the value of a 16-bit unsigned integer X in hexadecimal number system is BCA9. The representation of the value of X in Octal number system is :
- (1) 136251
  - (2) 571244
  - (3) 736251
  - (4) 571247
98. In data flow diagram, an originator or receiver of data is usually designed by :
- (1) Circle
  - (2) Arrow
  - (3) Rectangle
  - (4) Square box
99. Consider the following function implemented in C :
- ```
void print xy(int x, int y)
{
    int * ptr;
    x = 0;
    ptr = &x;
    y = *ptr;
    *ptr = 1;
    print f("%d%d", x, y);
}
```
- the output of invoking print xy (1, 1) is :
- (1) 0, 0
  - (2) 0, 1
  - (3) 1, 0
  - (4) 1, 1
100. Linked lists of NULL pointers to signal :
- (1) end of list
  - (2) start of list
  - (3) Either (1) or (2)
  - (4) Neither (1) nor (2)

(DO NOT OPEN THIS QUESTION BOOKLET BEFORE TIME OR UNTIL YOU ARE ASKED TO DO SO)

**B**

**M.Phil./Ph.D./URS-EE-Nov.-2018**

**SET-Y**

**SUBJECT : Computer Science**

**100018**

Sr. No. ....

Time : 1¼ Hours

Max. Marks : 100

Total Questions : 100

Roll No. (in figures) \_\_\_\_\_ (in words) \_\_\_\_\_

Name \_\_\_\_\_ Father's Name \_\_\_\_\_

Mother's Name \_\_\_\_\_ Date of Examination \_\_\_\_\_

\_\_\_\_\_  
(Signature of the Candidate)

\_\_\_\_\_  
(Signature of the Invigilator) -

**CANDIDATES MUST READ THE FOLLOWING INFORMATION/INSTRUCTIONS BEFORE STARTING THE QUESTION PAPER.**

- 1. All questions are compulsory.**
- The candidates **must return** the question booklet as well as OMR Answer-Sheet to the Invigilator concerned before leaving the Examination Hall, failing which a case of use of unfair-means / misbehaviour will be registered against him / her, in addition to lodging of an FIR with the police. Further the answer-sheet of such a candidate will not be evaluated.
- Keeping in view the transparency of the examination system, carbonless OMR Sheet is provided to the candidate so that a copy of OMR Sheet may be kept by the candidate.
- Question Booklet along with answer key of all the A, B, C & D code will be got uploaded on the university website after the conduct of Entrance Examination. In case there is any discrepancy in the Question Booklet/Answer Key, the same may be brought to the notice of the Controller of Examination in writing/through E.Mail within 24 hours of uploading the same on the University Website. Thereafter, no complaint in any case, will be considered.
- The candidate **must not** do any rough work or writing in the OMR Answer-Sheet. Rough work, if any, may be done in the question booklet itself. Answers **must not** be ticked in the question booklet.
- There will be no negative marking. Each correct answer will be awarded one full mark. Cutting, erasing, overwriting and more than one answer in OMR Answer-Sheet will be treated as incorrect answer.**
- Use only **Black** or **Blue Ball Point Pen** of good quality in the OMR Answer-Sheet.
- Before answering the questions, the candidates should ensure that they have been supplied correct and complete booklet. Complaints, if any, regarding misprinting etc. will not be entertained 30 minutes after starting of the examination.**

SEAL

**M.Phil./Ph.D./URS-EE-Nov.-2018/(Computer Sci.)(SET-Y)/(B)**

1. Semaphore operations are atomic because they are implemented within the ..... :  
(1) Kernel (2) Shell  
(3) User process (4) Normal process space
2. Which of the following scheduling algorithms could result in saturation ?  
(1) First Come First Served  
(2) Shortest Job First  
(3) Round Robin  
(4) Highest Response Ratio Next
3. The maximum number of processes that can be in ready state for a computer system with  $n$  CPUs is :  
(1)  $n$  (2)  $n^2$  (3)  $2^n$  (4) Independent of  $n$
4. In which of the following page replacement policies, Belady's anomaly may occur ?  
(1) FIFO (2) Optimal (3) LRU (4) MRU
5. Maximum data rate of channel for a noiseless 3-KHz binary channel is :  
(1) 3000 bps (2) 6000 bps (3) 1500 bps (4) None of the above
6. The Hamming distance between 001111 and 010011 is :  
(1) 1 (2) 2 (3) 3 (4) 4
7. There are 5 routers and 6 networks in an interworking, using link state routing, how many routing tables are there ?  
(1) 1 (2) 5 (3) 6 (4) 11
8. Congestion control for multicasting flows from multiple sources to multiple destinations, the solution that can handle this is :  
(1) RSVP (2) Load shedding  
(3) Both (1) and (2) (4) None of these
9. Which one of the following protocols is *not* used to resolve one form of address to another one ?  
(1) DNS (2) ARP (3) DHCP (4) RARP
10. Consider the given IP address 156.216.24.65 with a subnet mark of 7-bits, what are the number of hosts and subnets ?  
(1) 512, 128 (2) 510, 126 (3) 511, 127 (4) 509, 125

11. Consider the grammar

$$S \rightarrow a$$

$$S \rightarrow ab$$

The given grammar is :

- (1) LR (1) only (2) LL (1) only  
 (3) Both LR (1) and LL (1) (4) LR (1) but not LL (1)
12. The FIRST and FOLLOW sets for the grammar :

$$S \rightarrow SS + | SS^* | a$$

- (1) FIRST(S) = {a} (2) FIRST(S) = {+}  
 FOLLOW(S) = {+, \*, \$} FOLLOW(S) = {+, \*, \$}  
 (3) FIRST(S) = {a} (4) FIRST(S) = {+, \*}  
 FOLLOW(S) = {+, \*} FOLLOW(S) = {+, \*, \$}

13. YACC builds up :

- (1) SLR passing table (2) Canonical LR passing table  
 (3) LALR passing table (4) None of these

14. Resolution of externally defined symbols is performed by a :

- (1) Linker (2) Loader (3) Compiler (4) Interpreter

15. Consider the grammar :

$$S \rightarrow (S) | a$$

Let the number of states in SLR(1), LR(1) and LALR(1) passers for the grammar be  $n_1$ ,  $n_2$  and  $n_3$  respectively. The following relationship holds good :

- (1)  $n_1 < n_2 < n_3$  (2)  $n_1 = n_3 < n_2$  (3)  $n_1 = n_2 = n_3$  (4)  $n_1 \geq n_3 \geq n_2$

16. Consider the following Syntax Directed Translation Scheme (SDTS) with non-terminals {S, A} and terminals {a, b}

$$S \rightarrow aA \quad \{\text{print 1}\}$$

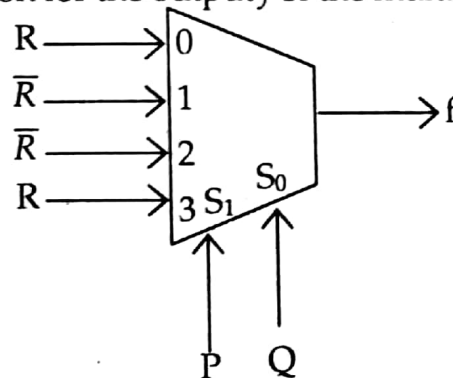
$$S \rightarrow a \quad \{\text{print 2}\}$$

$$A \rightarrow Sb \quad \{\text{print 3}\}$$

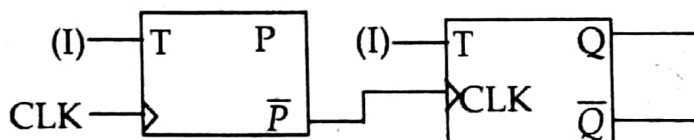
Using the above SDTS, the output printed by a bottom-up parser, for the input  $aab$  is :

- (1) 132 (2) 223 (3) 231 (4) Syntax error

- 17.** Replacing the expression  $2 * 3.14$  by  $6.28$  is :
- (1) Constant folding (2) Induction variable  
(3) Strength reduction (4) Code reduction
- 18.** The evaluation strategy which delays the evaluation of an expression until its value is needed and which avoids repeated evaluations is :
- (1) Early evaluation (2) Late evaluation  
(3) Lazy evaluation (4) Critical evaluation
- 19.** In a two pass assembler the pseudo-code EQU is to be evaluated during :
- (1) pass 1 (2) pass 2  
(3) not evaluated by the assembler (4) None of the above
- 20.** A compiler-compiler is a :
- (1) compiler which compiles a compiler program  
(2) software tool used in automatic generation of a compiler  
(3) compiler written in the same language it compiles  
(4) another name for cross compiler
- 21.** The Boolean expression for the output  $f$  of the multiplexer shown below is :



- (1)  $\overline{P \oplus Q \oplus R}$  (2)  $P \oplus Q \oplus R$  (3)  $P + Q + R$  (4)  $\overline{P + Q + R}$
- 22.** A 4-bit MOD-16 ripple counter uses JK flip-flops. If the propagation delay of each flip-flop is 50 ns sec, the maximum clock frequency that can be used is equal to :
- (1) 2 MHz (2) 3 MHz (3) 5 MHz (4) 20 MHz
- 23.** For a given counter identify its behaviour :



The output is taken from PQ

- (1) MOD-4 up counter (2) MOD-2 down counter  
(3) MOD-4 down counter (4) MOD-2 up counter

24. Consider the following two tables  $T_1$  and  $T_2$

| $T_1$ |   |   | $T_2$ |   |   |
|-------|---|---|-------|---|---|
| P     | Q | R | A     | B | C |
| 11    | a | 6 | 11    | b | 7 |
| 16    | b | 9 | 26    | c | 4 |
| 26    | a | 7 | 11    | b | 6 |

What is the number of tuples present in the result of algebraic expression ?

$$T_1 \bowtie_{(T_1.P = T_2.A)} T_2$$

- (1) 2                      (2) 3                      (3) 4                      (4) 5
25. Suppose  $R_1(A, B)$  and  $R_2(C, D)$  are two relation schemas. Let  $R_1$  and  $R_2$  be the corresponding relation instances. B is a foreign key that refers to C in  $R_2$ . If data in  $R_1$  and  $R_2$  satisfy referential integrity constraints, which of the following is true ?
- (1)  $\prod_B (R_1) - \prod_C (R_2) = \phi$                       (2)  $\prod_C (R_2) - \prod_B (R_1) = \phi$   
 (3)  $\prod_B (R_1) - \prod_C (R_2) \neq \phi$                       (4) Both (1) and (2)
26. The number of entities participating in the relationship is known as :
- (1) Maximum cardinality                      (2) Composite identifiers  
 (3) Degree                      (4) None
27. Which one is correct ?
- (1) Primary Key  $\subset$  Super Key  $\subset$  Candidate Key  
 (2) Candidate Key  $\subset$  Super Key  $\subset$  Primary Key  
 (3) Super Key  $\subset$  Primary Key  $\subset$  Candidate Key  
 (4) Primary Key  $\subset$  Candidate Key  $\subset$  Super Key
28. For the given tables

| A              |                | B              |
|----------------|----------------|----------------|
| X              | Y              | Y              |
| a <sub>1</sub> | b <sub>1</sub> | b <sub>1</sub> |
| a <sub>2</sub> | b <sub>1</sub> | b <sub>2</sub> |
| a <sub>2</sub> | b <sub>2</sub> |                |
| a <sub>1</sub> | b <sub>2</sub> |                |

$A \div B$  will return :

- (1) a<sub>1</sub>, a<sub>2</sub>                      (2) a<sub>1</sub>                      (3) a<sub>2</sub>                      (4) None of these

29. Consider the join of a relation  $A$  with a relation  $B$ . If  $A$  has  $m$  tuples and  $B$  has  $n$  tuples, then the maximum and minimum sizes of the join respectively are :
- (1)  $mn$  and  $m + n$  (2)  $(m + n)$  and  $(m - n)$   
 (3)  $mn$  and  $m$  (4)  $mn$  and 0
30. Which one is *not* a query language ?
- (1) SQL (2) QBE (3) My SQL (4) Data log
31. A wheel graph with eleven vertices has a chromatic number of :
- (1) 3 (2) 4 (3) 2 (4) None of these
32. Which of the following is a correct match ?
- | List-I               | List-II                                                         |
|----------------------|-----------------------------------------------------------------|
| (i) Circuit          | (a) There exists a path between every distinct pair of vertices |
| (ii) Connected graph | (b) A path that contains every edge of a graph exactly once     |
| (iii) Euler Path     | (c) A graph that can be drawn in a plane with no crossing       |
| (iv) Planar Graph    | (d) A path that begins and ends at the same vertex              |
- (1) (i) - (b), (ii) - (c), (iii) - (d), (iv) - (a) (2) (i) - (d), (ii) - (b), (iii) - (a), (iv) - (c)  
 (3) (i) - (d), (ii) - (a), (iii) - (b), (iv) - (c) (4) None of these
33. Which one of the following is the minimum error code ?
- (1) Octal code (2) Gray code (3) Binary code (4) Excess-3 code
34. The minimum number of NAND gates required to implement  $A \oplus B \oplus C$  is :
- (1) 8 (2) 10 (3) 9 (4) 6
35. How many 2-input multiplexers are required to construct a  $2^{10}$ -input multiplexer ?
- (1) 31 (2) 10 (3) 127 (4) 1023
36. How many 3-to-8 line decoders with an enable input are needed to construct a 6-to-64 line decoder without using any other logic gates ?
- (1) 7 (2) 8 (3) 9 (4) 10
37. The values of  $x$  and  $y$ , if  $(x567)_8 + (2yx5)_8 = (71yx)_8$  is :
- (1) 4, 3 (2) 3, 3 (3) 4, 4 (4) 4, 5
38. A computer uses a floating-point representation comprising a signed magnitude fractional mantissa and an excess-16 base-8 exponent. What decimal number is represented by a floating-point number whose exponent is 10011, mantissa 101000, and the sign bit set ?
- (1) - 6250 (2) -20480 (3) - 320 (4) - 0.00122

39. The following program fragment in C  
for ( $i = 3$ );  $i < 15$ ;  $i + = 3$ );  
    printf("%d", i);  
results in :
- (1) a syntax error
  - (2) an execution error
  - (3) printing of 12
  - (4) printing of 15
40. The body of the following for loop  
for (putchar ('a'); putchar(0); putchar('c'))  
    putchar ('b');  
will be executed :
- (1) 0 times
  - (2) 1 times
  - (3) Infinitely many times
  - (4) will not be executed because of syntax error
41. Traffic intensity is expressed in :
- (1) Erlangs
  - (2) Erlangs/MHz/km
  - (3)  $\lambda$ /sec
  - (4) dB/sec
42. Guard band is ?
- (1) The channel spectrum
  - (2) The bandwidth allotted to signal
  - (3) The small unused bandwidth between the frequency channels to avoid interference
  - (4) The spectrum acquired by the noise between signals
43. OLE stands for :
- (1) Open Linking and Embedding
  - (2) Objective Linking and Embedding
  - (3) Object Linking and Embedding
  - (4) Open Link and End
44. What does ERP stand for ?
- (1) Expanse Research Project
  - (2) Enterprise Resource Planning
  - (3) Enterprise Research Planning
  - (4) Expanse Resource Project



45. Identify the correct sequence in which the following packets are transmitted on the network by a host when a browser requests a webpage from a remote server, assuming that the host has just been restarted ?
- (1) HTTP GET request, DNS query, TCP SYN
  - (2) DNS query, HTTP GET request, , TCP SYN
  - (3) TCP SYN, DNS query, HTTP GET request
  - (4) DNS query, TCP SYN, HTTP GET request
46. Standard protocols like HTTP, SMTP, MNTP are part of :
- (1) Presentation layer
  - (2) Application layer
  - (3) Session layer
  - (4) Not part of any layer
47. The representation of the value of a 16-bit unsigned integer X in hexadecimal number system is BCA9. The representation of the value of X in Octal number system is :
- (1) 136251
  - (2) 571244
  - (3) 736251
  - (4) 571247
48. In data flow diagram, an originator or receiver of data is usually designed by :
- (1) Circle
  - (2) Arrow
  - (3) Rectangle
  - (4) Square box
49. Consider the following function implemented in C :
- ```
void print xy(int x, int y)
{
    int * ptr;
    x = 0;
    ptr = &x;
    y = *ptr;
    *ptr = 1;
    print f("%d%d", x, y);
}
```
- the output of invoking print xy (1, 1) is :
- (1) 0,0
  - (2) 0,1
  - (3) 1,0
  - (4) 1,1
50. Linked lists of NULL pointers to signal :
- (1) end of list
  - (2) start of list
  - (3) Either (1) or (2)
  - (4) Neither (1) nor (2)

51. Which of the following system software resides in main memory always ?  
 (1) Text editor (2) Assembler (3) Linker (4) Loader
52. Which of the following UNIX tools receives input only from the standard input ?  
 (1) awk (2) grep (3) sed (4) tr
53. The CC command makes a total of :  
 (1) 1 pass (2) 2 passes (3) 4 passes (4) 5 passes
54. The following C program  

```
main()
{
    fork (); fork (); printf ("yes");
}
```

 prints yes :  
 (1) only once (2) twice (3) 4 times (4) 8 times
55. Which of the following calls never returns an error ?  
 (1) getpid (2) fork (3) ioctl (4) open
56. The following sequence of commands `grep x * .c > mn &`  
`wc -l mn&`  
`rm mn&`  
 produces the same result as the single command :  
 (1) `grep x * .c | wc -l` (2) `wc -l < grep x * .c`  
 (3) `grep x *.c > wc -l` (4) None of the above
57. A process refers to 5 pages A, B, C, D and E in the order A; B; C; D; A; B; E; A; B; C; D; E. If the page replacement is FIFO, the number of pages which transfer with an empty internal store of 3 frames is :  
 (1) 8 (2) 10 (3) 9 (4) 7

58. Which of the following is FALSE ?
- (1) User level threads are not scheduled by the Kernel
  - (2) When a user level thread is blocked, all other threads of its processes are blocked
  - (3) Context switching between user level threads is faster than context switching between Kernel level threads
  - (4) Kernel level threads cannot share the code segment
59. A shared variable  $x$ , initialized to 0, is operated one by four concurrent processes  $W$ ,  $X$ ,  $Y$ ,  $Z$  as follows :
- Each of the processes  $W$  and  $X$  reads  $x$  from memory, increments by one, stores it to memory, and then terminates. Each of the processes  $Y$  and  $Z$  reads  $x$  from memory, decrements by two, stores it to memory, and then terminates. Each process before reading  $x$  invokes the  $P$  operation (i.e. wait) on a counting semaphore  $S$  and invokes the  $V$  operation (i.e. signal) on the semaphore  $S$  after storing  $x$  to memory. Semaphore  $S$  is initialized to 2.
- What is the maximum possible value of  $x$  after all processes complete execution ?
- (1) -2
  - (2) -1
  - (3) 1
  - (4) 2
60. To avoid the race condition, the number of processes allowed in critical section is :
- (1) 0
  - (2) 1
  - (3) 2
  - (4) 3
61. In an encryption scheme that uses RSA, values for  $p$  and  $q$  are selected to be 5 and 7 respectively. What could be the value of  $d$  ?
- (1) 12
  - (2) 3
  - (3) 11
  - (4) 9
62. What is the size of key in triple DES ?
- (1) 168 bits
  - (2) 112 bits
  - (3) 56 bits
  - (4) Either (1) or (2) or (3)
63. Which one of the following is *not* desired in a good SRS document ?
- (1) Functional requirements
  - (2) Non-functional requirements
  - (3) Goals of implementation
  - (4) Algorithms for software implementation
64. According to Brooks, adding more people to an already late software project makes it :
- (1) late
  - (2) fast
  - (3) does not impact schedule
  - (4) None of the above
65. For a real time software the KLOC is 28.2, what is the effort in person month calculated by using basic COCOMO model ?
- (1) 146
  - (2) 198
  - (3) 220
  - (4) 248

66. Register renaming is done in pipelined processors :
- (1) as an alternative to register allocation at compile time
  - (2) for efficient access to function parameters and local variables
  - (3) to handle certain kinds of hazards
  - (4) as part of address translation
67. EDI over Internet uses :
- (1) MIME to attach EDI forms to e-mail messages
  - (2) FTP to send business forms
  - (3) HTTP to send business forms
  - (4) SGML to send business forms
68. In electronic cash payment :
- (1) A debit card payment system is used
  - (2) A credit card payment system is used
  - (3) RSA cryptography is used in transactions
  - (4) A customer buys several electronic coins which are digitally signed by coin issuing bank
69. Commonly used mode for 3G networks is :
- (1) TDMA
  - (2) FDMA
  - (3) FDD
  - (4) TDD
70. The shape of the cellular region for maximum radio coverage is :
- (1) Circular
  - (2) Square
  - (3) Oval
  - (4) Hexagon
71. Consider the given relation and functional dependencies  $R(ABC)$   
 $FD = (AB \rightarrow C, C \rightarrow A)$   
 The relation is in which normal form ?
- (1) 1 NF
  - (2) 2 NF
  - (3) 3 NF
  - (4) BCNF
72. Consider the given functional dependencies :
- $AB \rightarrow CD$   
 $AF \rightarrow D$   
 $DE \rightarrow F$   
 $C \rightarrow G$   
 $F \rightarrow E$   
 $G \rightarrow A$
- Which one of the following is false ?
- (1)  $\{CF\}^+ = \{ACDFEG\}$
  - (2)  $\{BG\}^+ = \{ABCDG\}$
  - (3)  $\{AB\}^+ = \{ABCDG\}$
  - (4)  $\{AF\}^+ = \{ACDEFG\}$

73. The maximum number of superkeys for the relation schema  $R(E, F, G, H)$  with  $E$  as the key is :
- (1) 6                      (2) 7                      (3) 8                      (4) 9
74. A hash function  $f$  defined as  $f(\text{key}) = \text{key} \bmod 7$ , with linear probing, is used to insert the keys 37, 38, 72, 48, 98, 11, 56 into a table indexed from 0 to 6. What will be the location of key 11 ?
- (1) 5                      (2) 6                      (3) 4                      (4) 3
75. Consider the following :
- Block size = 1025 bytes  
 Record length in data file = 100 bytes  
 Total number of records = 30000  
 Search key = 9 bytes  
 Pointer = 6 bytes
- What is the number of index blocks ?
- (1) 44                      (2) 45                      (3) 46                      (4) None
76. A file is organized so that the ordering of data records is the same as or close to the ordering of data entries in some index. Then that index is called ?
- (1) Dense                      (2) Sparse                      (3) Clustered                      (4) Unclustered
77.  $B^+$  trees are considered BALANCED because :
- (1) The lengths of the paths from the root to all leaf nodes are all equal  
 (2) The lengths of the paths from the root to all leaf nodes differ from each other by at most 1  
 (3) The number of children of any two non-leaf sibling nodes differ by at most 1  
 (4) The number of records in any two leaf nodes differ by at most 1
78. For merging two sorted lists of sizes  $m$  and  $n$  into a sorted list of size  $m + n$ , we require comparisons of :
- (1)  $O(m)$                       (2)  $O(n)$                       (3)  $O(m + n)$                       (4)  $O(\log(m) + \log(n))$
79. A binary tree has  $n$  leaf nodes. The number of nodes of degree 2 in this tree is :
- (1)  $\log_2 n$                       (2)  $n - 1$                       (3)  $n$                       (4)  $2^n$

80. A binary search tree contains the values 1, 2, 3, 4, 5, 6, 7 and 8. The tree is traversed in preorder and the values are printed out. Which of the following sequences is a valid output ?

- (1) 53124786            (2) 53126487            (3) 53241678            (4) 53124768

81. main( )

```
{  
    int a = 5, b = 2;  
    printf("%d", a+++b);  
}
```

- (1) results in syntax error            (2) prints 7  
(3) prints 8            (4) prints 5

82. The following program

```
main( )  
{  
    int abc ( );  
    abc ( );  
    (*abc) ( );  
}  
  
int abc ( )  
{ print f ("come"); }
```

- (1) results in a completion error            (2) prints come  
(3) prints come come            (4) results in a run time error

83. What does the following program print ?

```
# include <stdio.h>  
main( )  
{  
    inc ( ); inc ( ); inc ( );  
}  
  
inc ( )  
{  
    static int x;  
    printf("%d", ++x);  
}
```

- (1) 012  
(2) 123  
(3) prints 3 consecutive, but unpredictable numbers  
(4) prints 111

84. The expression  $4 + 6 / 3 * 2 - 2 + 7 \% 3$  evaluates to :

- (1) 3                      (2) 4                      (3) 6                      (4) 7

85. The following program fragment :

```
int i = 10;

void main ( )
{
    int i = 20;
    {
        int i = 30;
        cout << i << :: i;
    }
}
```

- (1) prints 3010                      (2) prints 3020  
 (3) will result in a run time error                      (4) None of the above

86. The statements

```
int a = 5;

cout << "FIRST" >> (a << 2) << "SECOND";
```

outputs :

- (1) FIRST 52 SECOND                      (2) FIRST 20 SECOND  
 (3) SECOND 25 FIRST                      (4) an error message

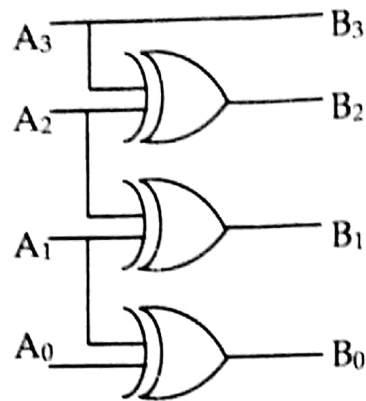
87. Which of the following is not a storage class supported by C++ ?

- (1) Register                      (2) Auto                      (3) Mutable                      (4) Dynamic

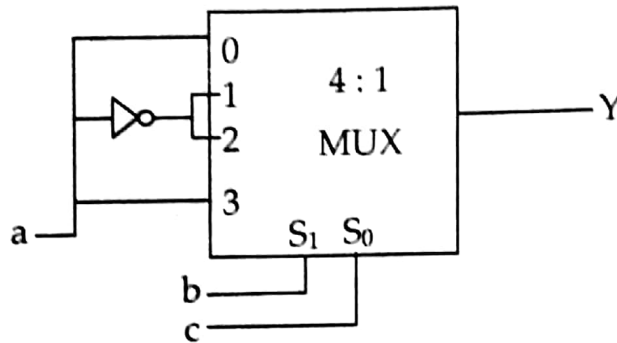
88. C front :

- (1) is the front end of a C compiler  
 (2) is the preprocessor of a C compiler  
 (3) is a tool that translates a C++ code to its equivalent C code  
 (4) none of the above

89. The circuit is used to convert one code to another. Identify it :



- (1) Binary to Gray (2) Gray to Binary  
 (3) Gray to XS-3 (4) Gray to 8421
90. the following multiplexer circuit is equal to :

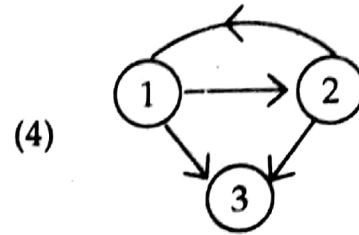
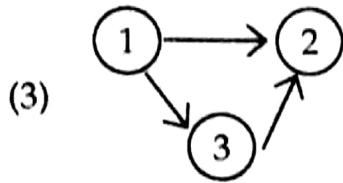
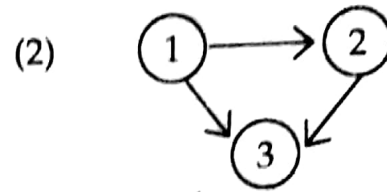
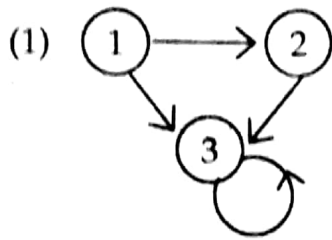


- (1) Implementation of sum equation of full adder  
 (2) Implementation of carry equation of full adder  
 (3) Implementation of borrow equation of full subtractor  
 (4) All of the above
91. Let  $P$ ,  $Q$  and  $R$  be three atomic propositional assertions. Let  $X$  denote  $(P \vee Q) \rightarrow R$  and  $Y$  denote  $(P \rightarrow R) \vee (Q \rightarrow R)$ . Which one of the following is a tautology ?  
 (1)  $X \leftrightarrow Y$  (2)  $Y \rightarrow X$  (3)  $X \rightarrow Y$  (4)  $\sim Y \rightarrow X$
92. Which one of the following well-formed formulae in predicate calculus is **not** valid ?  
 (1)  $(\forall x p(x) \Rightarrow \forall x q(x)) \Rightarrow (\exists x \sim p(x) \vee \forall x q(x))$   
 (2)  $(\exists x p(x) \vee \exists x q(x)) \Rightarrow \exists x (p(x) \vee q(x))$   
 (3)  $\exists x (p(x) \wedge q(x)) \Rightarrow (\exists x p(x) \wedge \exists x q(x))$   
 (4)  $\forall x (p(x) \vee q(x)) \Rightarrow (\forall x p(x) \vee \forall x q(x))$



93. Akshay speaks the truth in 45% of the cases. In a rainy season, on each day there is a 75% chance of raining. On a certain day in the rainy season, Akshay tells his mother that it is raining outside. What is the probability that it is actually raining ?
- (1)  $\frac{27}{38}$                       (2)  $\frac{25}{35}$                       (3)  $\frac{31}{36}$                       (4)  $\frac{52}{128}$
94. Two  $n$  bit binary strings  $S_1$  and  $S_2$  are chosen randomly with uniform probability. The probability that Hamming distance between these strings (the number of bit positions where the two strings differ) is equal to  $d$  is :
- (1)  $\frac{{}^n C_d}{2^n}$                       (2)  $\frac{{}^n C_d}{2^d}$                       (3)  $\frac{d}{2^n}$                       (4)  $\frac{1}{2^d}$
95.  $f(x)$  and  $g(x)$  are two functions differentiable in  $[0, 1]$  such that  $f(0) = 2$ ;  $g(0) = 0$ ;  $f(1) = 6$ ; and  $g(1) = 2$ . Then these must exist a constant  $C$  in :
- (1)  $(0, 1)$  such that  $f'(c) = 2g'(c)$                       (2)  $[0, 1]$  such that  $f'(c) = 2g'(c)$   
 (3)  $(0, 1)$  such that  $2f'(c) = g'(c)$                       (4)  $[0, 1]$  such that  $2f'(c) = g'(c)$
96.  $(G, *)$  is an abelian group. Then :
- (1)  $x = x^{-1}$ , for any  $x$  belonging to  $G$   
 (2)  $x = x^2$ , for any  $x$  belonging to  $G$   
 (3)  $(x * y)^2 = x^2 * y^2$ , for any  $x, y$  belonging to  $G$   
 (4)  $G$  is of finite order
97. The number of equivalence relations of the set  $[1, 2, 3, 4]$  is :
- (1) 15                      (2) 16                      (3) 24                      (4) 4
98. In a set of integers, a relation  $R$  is defined as  $aRb$ , if and only if  $b = |a|$ . This relation is :
- (1) Reflexive                      (2) Irreflexive                      (3) Symmetric                      (4) Anti-symmetric
99. Which of the following statements is true ?
- P : All totally ordered sets have least elements.  
 Q : The Hasse diagram of a totally ordered set is a line.
- (1) P alone                      (2) Q alone                      (3) Both P and Q                      (4) Neither P nor Q

100. Let  $M$  be a  $3 \times 3$  adjacency matrix corresponding to a given graph of three nodes labeled 1, 2, 3. If entry  $(1, 3)$  in  $M^3$  is 2, then the graph could be :



(DO NOT OPEN THIS QUESTION BOOKLET BEFORE TIME OR UNTIL YOU ARE ASKED TO DO SO)

C

M.Phil./Ph.D./URS-EE-Nov.-2018

SET-Y

SUBJECT : Computer Science

Sr. No. .... 100011

Time : 1¼ Hours

Max. Marks : 100

Total Questions : 100

Roll No. (in figures) \_\_\_\_\_ (in words) \_\_\_\_\_

Name \_\_\_\_\_ Father's Name \_\_\_\_\_

Mother's Name \_\_\_\_\_ Date of Examination \_\_\_\_\_

\_\_\_\_\_  
(Signature of the Candidate)

\_\_\_\_\_  
(Signature of the Invigilator)

**CANDIDATES MUST READ THE FOLLOWING INFORMATION/INSTRUCTIONS BEFORE STARTING THE QUESTION PAPER.**

1. **All questions are compulsory.**
2. The candidates **must return** the question booklet as well as OMR Answer-Sheet to the Invigilator concerned before leaving the Examination Hall, failing which a case of use of unfair-means / misbehaviour will be registered against him / her, in addition to lodging of an FIR with the police. Further the answer-sheet of such a candidate will not be evaluated.
3. Keeping in view the transparency of the examination system, carbonless OMR Sheet is provided to the candidate so that a copy of OMR Sheet may be kept by the candidate.
4. Question Booklet along with answer key of all the A, B, C & D code will be got uploaded on the university website after the conduct of Entrance Examination. In case there is any discrepancy in the Question Booklet/Answer Key, the same may be brought to the notice of the Controller of Examination in writing/through E.Mail within 24 hours of uploading the same on the University Website. Thereafter, no complaint in any case, will be considered.
5. The candidate **must not** do any rough work or writing in the OMR Answer-Sheet. Rough work, if any, may be done in the question booklet itself. Answers **must not** be ticked in the question booklet.
6. **There will be no negative marking. Each correct answer will be awarded one full mark. Cutting, erasing, overwriting and more than one answer in OMR Answer-Sheet will be treated as incorrect answer.**
7. Use only **Black or Blue Ball Point Pen** of good quality in the OMR Answer-Sheet.
8. **Before answering the questions, the candidates should ensure that they have been supplied correct and complete booklet. Complaints, if any, regarding misprinting etc. will not be entertained 30 minutes after starting of the examination.**

M.Phil./Ph.D./URS-EE-Nov.-2018/(Computer Sci.)(SET-Y)/(C)

SEAL

1. Consider the given relation and functional dependencies  $R(ABC)$   
 $FD = (AB \rightarrow C, C \rightarrow A)$   
The relation is in which normal form ?  
(1) 1 NF                      (2) 2 NF                      (3) 3 NF                      (4) BCNF
2. Consider the given functional dependencies :  
 $AB \rightarrow CD$   
 $AF \rightarrow D$   
 $DE \rightarrow F$   
 $C \rightarrow G$   
 $F \rightarrow E$   
 $G \rightarrow A$   
Which one of the following is false ?  
(1)  $\{CF\}^+ = \{ACDFEG\}$                       (2)  $\{BG\}^+ = \{ABCDG\}$   
(3)  $\{AB\}^+ = \{ABCDG\}$                       (4)  $\{AF\}^+ = \{ACDEFG\}$
3. The maximum number of super-keys for the relation schema  $R(E, F, G, H)$  with  $E$  as the key is :  
(1) 6                      (2) 7                      (3) 8                      (4) 9
4. A hash function  $f$  defined as  $f(\text{key}) = \text{key} \bmod 7$ , with linear probing, is used to insert the keys 37, 38, 72, 48, 98, 11, 56 into a table indexed from 0 to 6. What will be the location of key 11 ?  
(1) 5                      (2) 6                      (3) 4                      (4) 3
5. Consider the following :  
Block size = 1025 bytes  
Record length in data file = 100 bytes  
Total number of records = 30000  
Search key = 9 bytes  
Pointer = 6 bytes  
What is the number of index blocks ?  
(1) 44                      (2) 45                      (3) 46                      (4) None
6. A file is organized so that the ordering of data records is the same as or close to the ordering of data entries in some index. Then that index is called ?  
(1) Dense                      (2) Sparse                      (3) Clustered                      (4) Unclustered

7.  $B^+$  trees are considered BALANCED because :
- (1) The lengths of the paths from the root to all leaf nodes are all equal
  - (2) The lengths of the paths from the root to all leaf nodes differ from each other by at most 1
  - (3) The number of children of any two non-leaf sibling nodes differ by at most 1
  - (4) The number of records in any two leaf nodes differ by at most 1
8. For merging two sorted lists of sizes  $m$  and  $n$  into a sorted list of size  $m + n$ , we require comparisons of :
- (1)  $O(m)$
  - (2)  $O(n)$
  - (3)  $O(m + n)$
  - (4)  $O(\log(m) + \log(n))$
9. A binary tree has  $n$  leaf nodes. The number of nodes of degree 2 in this tree is :
- (1)  $\log_2 n$
  - (2)  $n - 1$
  - (3)  $n$
  - (4)  $2^n$
10. A binary search tree contains the values 1, 2, 3, 4, 5, 6, 7 and 8. The tree is traversed in preorder and the values are printed out. Which of the following sequences is a valid output ?
- (1) 53124786
  - (2) 53126487
  - (3) 53241678
  - (4) 53124768
11. `main()`
- ```
{
    int a = 5, b = 2;
    printf("%d", a+++b);
}
```
- (1) results in syntax error
  - (2) prints 7
  - (3) prints 8
  - (4) prints 5
12. The following program
- ```
main()
{
    int abc ();
    abc ();
    (*abc) ();
}
int abc ()
{ print f ("come"); }
```
- (1) results in a completion error
  - (2) prints come
  - (3) prints come come
  - (4) results in a run time error

13. What does the following program print ?

```
#include <stdio.h>
main( )
{
    inc (); inc (); inc ();
}
inc ( )
{
    static int x;
    printf("%d", ++x);
}
```

- (1) 012
- (2) 123
- (3) prints 3 consecutive, but unpredictable numbers
- (4) prints 111

14. The expression  $4 + 6 / 3 * 2 - 2 + 7 \% 3$  evaluates to :

- (1) 3
- (2) 4
- (3) 6
- (4) 7

15. The following program fragment :

```
int i = 10;
void main ( )
{
    int i = 20;
    {
        int i = 30;
        cont << i << :: i;
    }
}
```

- (1) prints 3010
- (2) prints 3020
- (3) will result in a run time error
- (4) None of the above

16. The statements

```
int a = 5;
cout << "FIRST" >> (a << 2) << "SECOND";
```

outputs :

- (1) FIRST 52 SECOND
- (2) FIRST 20 SECOND
- (3) SECOND 25 FIRST
- (4) an error message

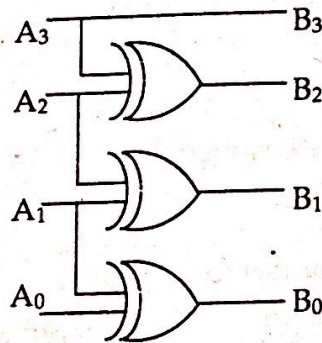
17. Which of the following is not a storage class supported by C++ ?

- (1) Register
- (2) Auto
- (3) Mutable
- (4) Dynamic

18. C front :

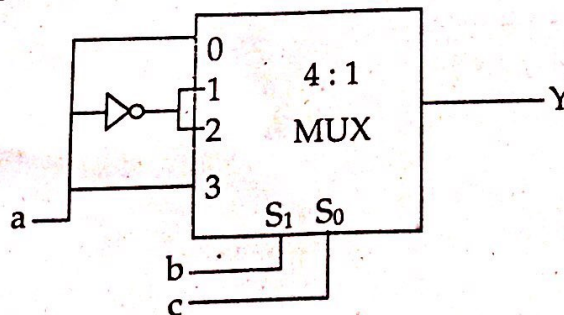
- (1) is the front end of a C compiler
- (2) is the preprocessor of a C compiler
- (3) is a tool that translates a C++ code to its equivalent C code
- (4) none of the above

19. The circuit is used to convert one code to another. Identify it :



- (1) Binary to Gray
- (2) Gray to Binary
- (3) Gray to XS-3
- (4) Gray to 8421

20. the following multiplexer circuit is equal to :



- (1) Implementation of sum equation of full adder
- (2) Implementation of carry equation of full adder
- (3) Implementation of borrow equation of full subtractor
- (4) All of the above

21. Let  $P, Q$  and  $R$  be three atomic propositional assertions. Let  $X$  denote  $(P \vee Q) \rightarrow R$  and  $Y$  denote  $(P \rightarrow R) \vee (Q \rightarrow R)$ . Which one of the following is a tautology ?  
 (1)  $X \leftrightarrow Y$                       (2)  $Y \rightarrow X$                       (3)  $X \rightarrow Y$                       (4)  $\sim Y \rightarrow X$
22. Which one of the following well-formed formulae in predicate calculus is *not* valid ?  
 (1)  $(\forall x p(x) \Rightarrow \forall x q(x)) \Rightarrow (\exists x \sim p(x) \vee \forall x mq(x))$   
 (2)  $(\exists x p(x) \vee \exists x q(x)) \Rightarrow \exists x (p(x) \vee q(x))$   
 (3)  $\exists x (p(x) \wedge q(x)) \Rightarrow (\exists x p(x) \wedge \exists x q(x))$   
 (4)  $\forall x (p(x) \vee q(x)) \Rightarrow (\forall x p(x) \vee \forall x q(x))$
23. Akshay speaks the truth in 45% of the cases. In a rainy season, on each day there is a 75% chance of raining. On a certain day in the rainy season, Akshay tells his mother that it is raining outside. What is the probability that it is actually raining ?  
 (1)  $\frac{27}{38}$                       (2)  $\frac{25}{35}$                       (3)  $\frac{31}{36}$                       (4)  $\frac{52}{128}$
24. Two  $n$  bit binary strings  $S_1$  and  $S_2$  are chosen randomly with uniform probability. The probability that Hamming distance between these strings (the number of bit positions where the two strings differ) is equal to  $d$  is :  
 (1)  $\frac{{}^n C_d}{2^n}$                       (2)  $\frac{{}^n C_d}{2^d}$                       (3)  $\frac{d}{2^n}$                       (4)  $\frac{1}{2^d}$
25.  $f(x)$  and  $g(x)$  are two functions differentiable in  $[0, 1]$  such that  $f(0) = 2$ ;  $g(0) = 0$ ;  $f(1) = 6$ ; and  $g(1) = 2$ . Then these must exist a constant  $C$  in :  
 (1)  $(0, 1)$  such that  $f'(c) = 2g'(c)$                       (2)  $[0, 1]$  such that  $f'(c) = 2g'(c)$   
 (3)  $(0, 1)$  such that  $2f'(c) = g'(c)$                       (4)  $[0, 1]$  such that  $2f'(c) = g'(c)$
26.  $(G, *)$  is an abelian group. Then :  
 (1)  $x = x^{-1}$ , for any  $x$  belonging to  $G$   
 (2)  $x = x^2$ , for any  $x$  belonging to  $G$   
 (3)  $(x * y)^2 = x^2 * y^2$ , for any  $x, y$  belonging to  $G$   
 (4)  $G$  is of finite order
27. The number of equivalence relations of the set  $[1, 2, 3, 4]$  is :  
 (1) 15                      (2) 16                      (3) 24                      (4) 4
28. In a set of integers, a relation  $R$  is defined as  $aRb$ , if and only if  $b = |a|$ . This relation is :  
 (1) Reflexive                      (2) Irreflexive                      (3) Symmetric                      (4) Anti-symmetric



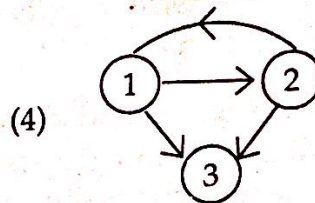
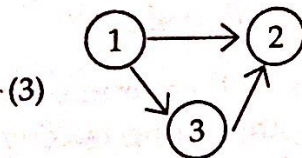
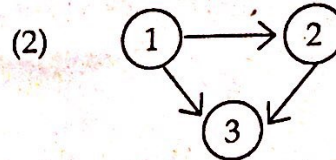
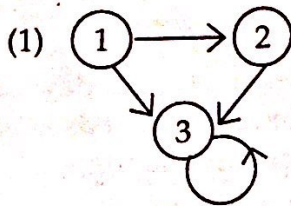
29. Which of the following statements is true ?

P : All totally ordered sets have least elements.

Q : The Hasse diagram of a totally ordered set is a line.

- (1) P alone                      (2) Q alone                      (3) Both P and Q                      (4) Neither P nor Q

30. Let  $M$  be a  $3 \times 3$  adjacency matrix corresponding to a given graph of three nodes labeled 1, 2, 3. If entry (1, 3) in  $M^3$  is 2, then the graph could be :



31. Traffic intensity is expressed in :

- (1) Erlangs  
(3)  $\lambda/\text{sec}$

- (2) Erlangs/MHz/km  
(4) dB/sec

32. Guard band is ?

- (1) The channel spectrum  
(2) The bandwidth allotted to signal  
(3) The small unused bandwidth between the frequency channels to avoid interference  
(4) The spectrum acquired by the noise between signals

33. OLE stands for :

- (1) Open Linking and Embedding  
(2) Objective Linking and Embedding  
(3) Object Linking and Embedding  
(4) Open Link and End

34. What does ERP stand for ?

- (1) Expanse Research Project  
(2) Enterprise Resource Planning  
(3) Enterprise Research Planning  
(4) Expanse Resource Project

35. Identify the correct sequence in which the following packets are transmitted on the network by a host when a browser requests a webpage from a remote server, assuming that the host has just been restarted ?
- (1) HTTP GET request, DNS query, TCP SYN
  - (2) DNS query, HTTP GET request, , TCP SYN
  - (3) TCP SYN, DNS query, HTTP GET request
  - (4) DNS query, TCP SYN, HTTP GET request
36. Standard protocols like HTTP, SMTP, MNTP are part of :
- (1) Presentation layer
  - (2) Application layer
  - (3) Session layer
  - (4) Not part of any layer
37. The representation of the value of a 16-bit unsigned integer X in hexadecimal number system is BCA9. The representation of the value of X in Octal number system is :
- (1) 136251
  - (2) 571244
  - (3) 736251
  - (4) 571247
38. In data flow diagram, an originator or receiver of data is usually designed by :
- (1) Circle
  - (2) Arrow
  - (3) Rectangle
  - (4) Square box
39. Consider the following function implemented in C :
- ```
void print xy(int x, int y)
{
    int * ptr;
    x = 0;
    ptr = &x;
    y = *ptr;
    *ptr = 1;
    print f("%d%d", x, y);
}
```
- the output of invoking print xy (1, 1) is :
- (1) 0, 0
  - (2) 0, 1
  - (3) 1, 0
  - (4) 1, 1
40. Linked lists of NULL pointers to signal :
- (1) end of list
  - (2) start of list
  - (3) Either (1) or (2)
  - (4) Neither (1) nor (2)

41. Which of the following system software resides in main memory always ?  
 (1) Text editor      (2) Assembler      (3) Linker      (4) Loader
42. Which of the following UNIX tools receives input only from the standard input ?  
 (1) awk      (2) grep      (3) sed      (4) tr
43. The CC command makes a total of :  
 (1) 1 pass      (2) 2 passes      (3) 4 passes      (4) 5 passes
44. The following C program  

```
main()
{
    fork (); fork (); printf ("yes");
}
```

 prints yes :  
 (1) only once      (2) twice      (3) 4 times      (4) 8 times
45. Which of the following calls never returns an error ?  
 (1) getpid      (2) fork      (3) ioctl      (4) open
46. The following sequence of commands `grep x * . c > mn &`  
`wc -l mn&`  
`rm mn&`  
 produces the same result as the single command :  
 (1) `grep x * . c | wc -l`      (2) `wc -l < grep x * . c`  
 (3) `grep x *.c > wc -l`      (4) None of the above
47. A process refers to 5 pages A, B, C, D and E in the order A; B; C; D; A; B; E; A; B; C; D; E. If the page replacement is FIFO, the number of pages which transfer with an empty internal store of 3 frames is :  
 (1) 8      (2) 10      (3) 9      (4) 7

48. Which of the following is FALSE ?

- (1) User level threads are not scheduled by the Kernel
- (2) When a user level thread is blocked, all other threads of its processes are blocked
- (3) Context switching between user level threads is faster than context switching between Kernel level threads
- (4) Kernel level threads cannot share the code segment

49. A shared variable  $x$ , initialized to 0, is operated one by four concurrent processes  $W$ ,  $X$ ,  $Y$ ,  $Z$  as follows :

Each of the processes  $W$  and  $X$  reads  $x$  from memory, increments by one, stores it to memory, and then terminates. Each of the processes  $Y$  and  $Z$  reads  $x$  from memory, decrements by two, stores it to memory, and then terminates. Each process before reading  $x$  invokes the  $P$  operation (i.e. wait) on a counting semaphore  $S$  and invokes the  $V$  operation (i.e. signal) on the semaphore  $S$  after storing  $x$  to memory. Semaphore  $S$  is initialized to 2.

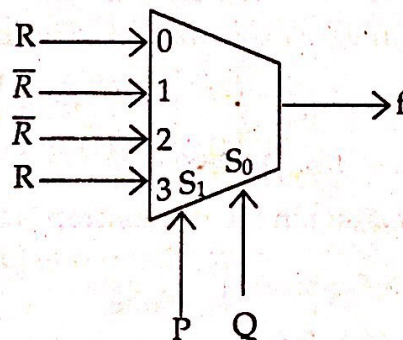
What is the maximum possible value of  $x$  after all processes complete execution ?

- (1) -2
- (2) -1
- (3) 1
- (4) 2

50. To avoid the race condition, the number of processes allowed in critical section is :

- (1) 0
- (2) 1
- (3) 2
- (4) 3

51. The Boolean expression for the output  $f$  of the multiplexer shown below is :

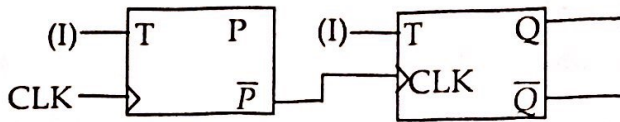


- (1)  $\overline{P \oplus Q \oplus R}$
- (2)  $P \oplus Q \oplus R$
- (3)  $P + Q + R$
- (4)  $\overline{P + Q + R}$

52. A 4-bit MOD-16 ripple counter uses JK flip-flops. If the propagation delay of each flip-flop is 50 ns sec, the maximum clock frequency that can be used is equal to :

- (1) 2 MHz
- (2) 3 MHz
- (3) 5 MHz
- (4) 20 MHz

53. For a given counter identify its behaviour :



The output is taken from PQ

- (1) MOD-4 up counter
- (2) MOD-2 down counter
- (3) MOD-4 down counter
- (4) MOD-2 up counter

54. Consider the following two tables  $T_1$  and  $T_2$

| P  | Q | R |
|----|---|---|
| 11 | a | 6 |
| 16 | b | 9 |
| 26 | a | 7 |

| A  | B | C |
|----|---|---|
| 11 | b | 7 |
| 26 | c | 4 |
| 11 | b | 6 |

What is the number of tuples present in the result of algebraic expression ?

$$T_1 \bowtie_{(T_1.P = T_2.A)} T_2$$

- (1) 2
- (2) 3
- (3) 4
- (4) 5

55. Suppose  $R_1(A, B)$  and  $R_2(C, D)$  are two relation schemas. Let  $R_1$  and  $R_2$  be the corresponding relation instances. B is a foreign key that refers to C in  $R_2$ . If data in  $R_1$  and  $R_2$  satisfy referential integrity constraints, which of the following is true ?

- (1)  $\prod_B (R_1) - \prod_C (R_2) = \phi$
- (2)  $\prod_C (R_2) - \prod_B (R_1) = \phi$
- (3)  $\prod_B (R_1) - \prod_C (R_2) \neq \phi$
- (4) Both (1) and (2)

56. The number of entities participating in the relationship is known as :

- (1) Maximum cardinality
- (2) Composite identifiers
- (3) Degree
- (4) None

57. Which one is correct ?

- (1) Primary Key  $\subset$  Super Key  $\subset$  Candidate Key
- (2) Candidate Key  $\subset$  Super Key  $\subset$  Primary Key
- (3) Super Key  $\subset$  Primary Key  $\subset$  Candidate Key
- (4) Primary Key  $\subset$  Candidate Key  $\subset$  Super Key

C

58. For the given tables

| A              |                | B              |
|----------------|----------------|----------------|
| X              | Y              | Y              |
| a <sub>1</sub> | b <sub>1</sub> | b <sub>1</sub> |
| a <sub>2</sub> | b <sub>1</sub> | b <sub>1</sub> |
| a <sub>2</sub> | b <sub>2</sub> | b <sub>2</sub> |
| a <sub>1</sub> | b <sub>2</sub> |                |

$A \div B$  will return :

- (1) a<sub>1</sub>, a<sub>2</sub>                      (2) a<sub>1</sub>                      (3) a<sub>2</sub>                      (4) None of these
59. Consider the join of a relation A with a relation B. If A has  $m$  tuples and B has  $n$  tuples, then the maximum and minimum sizes of the join respectively are :
- (1)  $mn$  and  $m + n$                       (2)  $(m + n)$  and  $(m - n)$   
 (3)  $mn$  and  $m$                       (4)  $mn$  and 0
60. Which one is *not* a query language ?
- (1) SQL                      (2) QBE                      (3) My SQL                      (4) Data log
61. Semaphore operations are atomic because they are implemented within the ..... :
- (1) Kernel                      (2) Shell  
 (3) User process                      (4) Normal process space
62. Which of the following scheduling algorithms could result in saturation ?
- (1) First Come First Served                      (2) Shortest Job First  
 (3) Round Robin                      (4) Highest Response Ratio Next
63. The maximum number of processes that can be in ready state for a computer system with  $n$  CPUs is :
- (1)  $n$                       (2)  $n^2$                       (3)  $2^n$                       (4) Independent of  $n$
64. In which of the following page replacement policies, Belady's anomaly may occur ?
- (1) FIFO                      (2) Optimal                      (3) LRU                      (4) MRU
65. Maximum data rate of channel for a noiseless 3-KHz binary channel is :
- (1) 3000 bps                      (2) 6000 bps                      (3) 1500 bps                      (4) None of the above
66. The Hamming distance between 001111 and 010011 is :
- (1) 1                      (2) 2                      (3) 3                      (4) 4
67. There are 5 routers and 6 networks in an interworking, using link state routing, how many routing tables are there ?
- (1) 1                      (2) 5                      (3) 6                      (4) 11

68. Congestion control for multicasting flows from multiple sources to multiple destinations, the solution that can handle this is :
- (1) RSVP (2) Load shedding  
(3) Both (1) and (2) (4) None of these
69. Which one of the following protocols is *not* used to resolve one form of address to another one ?
- (1) DNS (2) ARP (3) DHCP (4) RARP
70. Consider the given IP address 156.216.24.65 with a subnet mark of 7-bits, what are the number of hosts and subnets ?
- (1) 512, 128 (2) 510, 126 (3) 511, 127 (4) 509, 125
71. In an encryption scheme that uses RSA, values for  $p$  and  $q$  are selected to be 5 and 7 respectively. What could be the value of  $d$  ?
- (1) 12 (2) 3 (3) 11 (4) 9
72. What is the size of key in triple DES ?
- (1) 168 bits (2) 112 bits (3) 56 bits (4) Either (1) or (2) or (3)
73. Which one of the following is *not* desired in a good SRS document ?
- (1) Functional requirements (2) Non-functional requirements  
(3) Goals of implementation (4) Algorithms for software implementation
74. According to Brooks, adding more people to an already late software project makes it :
- (1) late (2) fast  
(3) does not impact schedule (4) None of the above
75. For a real time software the KLOC is 28.2, what is the effort in person month calculated by using basic COCOMO model ?
- (1) 146 (2) 198 (3) 220 (4) 248
76. Register renaming is done in pipelined processors :
- (1) as an alternative to register allocation at compile time  
(2) for efficient access to function parameters and local variables  
(3) to handle certain kinds of hazards  
(4) as part of address translation
77. EDI over Internet uses :
- (1) MIME to attach EDI forms to e-mail messages  
(2) FTP to send business forms  
(3) HTTP to send business forms  
(4) SGML to send business forms

78. In electronic cash payment :
- (1) A debit card payment system is used
  - (2) A credit card payment system is used
  - (3) RSA cryptography is used in transactions
  - (4) A customer buys several electronic coins which are digitally signed by coin issuing bank

79. Commonly used mode for 3G networks is :

- (1) TDMA                      (2) FDMA                      (3) FDD                      (4) TDD

80. The shape of the cellular region for maximum radio coverage is :

- (1) Circular                      (2) Square                      (3) Oval                      (4) Hexagon

81. A wheel graph with eleven vertices has a chromatic number of :

- (1) 3                      (2) 4                      (3) 2                      (4) None of these

82. Which of the following is a correct match ?

**List-I**

**List-II**

- |                      |                                                                 |
|----------------------|-----------------------------------------------------------------|
| (i) Circuit          | (a) There exists a path between every distinct pair of vertices |
| (ii) Connected graph | (b) A path that contains every edge of a graph exactly once     |
| (iii) Euler Path     | (c) A graph that can be drawn in a plane with no crossing       |
| (iv) Planar Graph    | (d) A path that begins and ends at the same vertex              |
- (1) (i) - (b), (ii) - (c), (iii) - (d), (iv) - (a)    (2) (i) - (d), (ii) - (b), (iii) - (a), (iv) - (c)  
 (3) (i) - (d), (ii) - (a), (iii) - (b), (iv) - (c)    (4) None of these

83. Which one of the following is the minimum error code ?

- (1) Octal code                      (2) Gray code                      (3) Binary code                      (4) Excess-3 code

84. The minimum number of NAND gates required to implement  $A \oplus B \oplus C$  is :

- (1) 8                      (2) 10                      (3) 9                      (4) 6

85. How many 2-input multiplexers are required to construct a  $2^{10}$ -input multiplexer ?

- (1) 31                      (2) 10                      (3) 127                      (4) 1023

86. How many 3-to-8 line decoders with an enable input are needed to construct a 6-to-64 line decoder without using any other logic gates ?

- (1) 7                      (2) 8                      (3) 9                      (4) 10



87. The values of  $x$  and  $y$ , if  $(x567)_8 + (2yx5)_8 = (71yx)_8$  is :  
 (1) 4, 3                      (2) 3, 3                      (3) 4, 4                      (4) 4, 5
88. A computer uses a floating-point representation comprising a signed magnitude fractional mantissa and an excess-16 base-8 exponent. What decimal number is represented by a floating-point number whose exponent is 10011, mantissa 101000, and the sign bit set ?  
 (1) - 6250                      (2) -20480                      (3) - 320                      (4) - 0.00122
89. The following program fragment in C  
`for (i = 3); i < 15; i += 3);`  
`print f("%d", i);`  
 results in :  
 (1) a syntax error                      (2) an execution error  
 (3) printing of 12                      (4) printing of 15
90. The body of the following for loop  
`for (putchar ('a'); putchar(0); putchar('c'))`  
`putchar ('b');`  
 will be executed :  
 (1) 0 times  
 (2) 1 times  
 (3) Infinitely many times  
 (4) will not be executed because of syntax error
91. Consider the grammar  
 $S \rightarrow a$   
 $S \rightarrow ab$   
 The given grammar is :  
 (1) LR (1) only                      (2) LL (1) only  
 (3) Both LR (1) and LL (1)                      (4) LR (1) but not LL (1)
92. The FIRST and FOLLOW sets for the grammar :  
 $S \rightarrow SS + \mid SS^* \mid a$   
 (1) FIRST(S) = {a}                      (2) FIRST(S) = {+}  
     FOLLOW(S) = {+, \*, \$}                      FOLLOW(S) = {+, \*, \$}  
 (3) FIRST(S) = {a}                      (4) FIRST(S) = {+, \*}  
     FOLLOW(S) = {+, \*}                      FOLLOW(S) = {+, \*, \$}

C

93. YACC builds up :
- (1) SLR passing table
  - (2) Canonical LR passing table
  - (3) LALR passing table
  - (4) None of these
94. Resolution of externally defined symbols is performed by a :
- (1) Linker
  - (2) Loader
  - (3) Compiler
  - (4) Interpreter
95. Consider the grammar :
- $$S \rightarrow (S) | a$$
- Let the number of states in SLR(1), LR(1) and LALR(1) passes for the grammar be  $n_1$ ,  $n_2$  and  $n_3$  respectively. The following relationship holds good :
- (1)  $n_1 < n_2 < n_3$
  - (2)  $n_1 = n_3 < n_2$
  - (3)  $n_1 = n_2 = n_3$
  - (4)  $n_1 \geq n_3 \geq n_2$
96. Consider the following Syntax Directed Translation Scheme (SDTS) with non-terminals  $\{S, A\}$  and terminals  $\{a, b\}$
- $$S \rightarrow aA \quad \{\text{print 1}\}$$
- $$S \rightarrow a \quad \{\text{print 2}\}$$
- $$A \rightarrow Sb \quad \{\text{print 3}\}$$
- Using the above SDTS, the output printed by a bottom-up parser, for the input  $aab$  is :
- (1) 132
  - (2) 223
  - (3) 231
  - (4) Syntax error
97. Replacing the expression  $2 * 3.14$  by  $6.28$  is :
- (1) Constant folding
  - (2) Induction variable
  - (3) Strength reduction
  - (4) Code reduction
98. The evaluation strategy which delays the evaluation of an expression until its value is needed and which avoids repeated evaluations is :
- (1) Early evaluation
  - (2) Late evaluation
  - (3) Lazy evaluation
  - (4) Critical evaluation
99. In a two pass assembler the pseudo-code EQU is to be evaluated during :
- (1) pass 1
  - (2) pass 2
  - (3) not evaluated by the assembler
  - (4) None of the above

100. A compiler-compiler is a :

- (1) compiler which compiles a compiler program
- (2) software tool used in automatic generation of a compiler
- (3) compiler written in the same language it compiles
- (4) another name for cross compiler

(DO NOT OPEN THIS QUESTION BOOKLET BEFORE TIME OR UNTIL YOU ARE ASKED TO DO SO)

**D**

**M.Phil./Ph.D./URS-EE-Nov.-2018**

**SET-Y**

**SUBJECT : Computer Science**

**100024**

Sr. No. ....

Time : 1¼ Hours

Max. Marks : 100

Total Questions : 100

Roll No. (in figures) \_\_\_\_\_ (in words) \_\_\_\_\_

Name \_\_\_\_\_ Father's Name \_\_\_\_\_

Mother's Name \_\_\_\_\_ Date of Examination \_\_\_\_\_

\_\_\_\_\_  
(Signature of the Candidate)

\_\_\_\_\_  
(Signature of the Invigilator)

**CANDIDATES MUST READ THE FOLLOWING INFORMATION/INSTRUCTIONS BEFORE STARTING THE QUESTION PAPER.**

- 1. All questions are compulsory.**
- The candidates **must return** the question booklet as well as OMR Answer-Sheet to the Invigilator concerned before leaving the Examination Hall, failing which a case of use of unfair-means / misbehaviour will be registered against him / her, in addition to lodging of an FIR with the police. Further the answer-sheet of such a candidate will not be evaluated.
- Keeping in view the transparency of the examination system, carbonless OMR Sheet is provided to the candidate so that a copy of OMR Sheet may be kept by the candidate.
- Question Booklet along with answer key of all the A, B, C & D code will be got uploaded on the university website after the conduct of Entrance Examination. In case there is any discrepancy in the Question Booklet/Answer Key, the same may be brought to the notice of the Controller of Examination in writing/through E.Mail within 24 hours of uploading the same on the University Website. Thereafter, no complaint in any case, will be considered.
- The candidate **must not** do any rough work or writing in the OMR Answer-Sheet. Rough work, if any, may be done in the question booklet itself. Answers **must not** be ticked in the question booklet.
- There will be no negative marking. Each correct answer will be awarded one full mark. Cutting, erasing, overwriting and more than one answer in OMR Answer-Sheet will be treated as incorrect answer.**
- Use only **Black** or **Blue Ball Point Pen** of good quality in the OMR Answer-Sheet.
- Before answering the questions, the candidates should ensure that they have been supplied correct and complete booklet. Complaints, if any, regarding misprinting etc. will not be entertained 30 minutes after starting of the examination.**

**M.Phil./Ph.D./URS-EE-Nov.-2018/(Computer Sci.)(SET-Y)/(D)**

**SEAL**

1. A wheel graph with eleven vertices has a chromatic number of :  
 (1) 3 (2) 4 (3) 2 (4) None of these
2. Which of the following is a correct match ?
- | List-I               | List-II                                                         |
|----------------------|-----------------------------------------------------------------|
| (i) Circuit          | (a) There exists a path between every distinct pair of vertices |
| (ii) Connected graph | (b) A path that contains every edge of a graph exactly once     |
| (iii) Euler Path     | (c) A graph that can be drawn in a plane with no crossing       |
| (iv) Planar Graph    | (d) A path that begins and ends at the same vertex              |
- (1) (i) - (b), (ii) - (c), (iii) - (d), (iv) - (a) (2) (i) - (d), (ii) - (b), (iii) - (a), (iv) - (c)  
 (3) (i) - (d), (ii) - (a), (iii) - (b), (iv) - (c) (4) None of these
3. Which one of the following is the minimum error code ?  
 (1) Octal code (2) Gray code (3) Binary code (4) Excess-3 code
4. The minimum number of NAND gates required to implement  $A \oplus B \oplus C$  is :  
 (1) 8 (2) 10 (3) 9 (4) 6
5. How many 2-input multiplexers are required to construct a  $2^{10}$ -input multiplexer ?  
 (1) 31 (2) 10 (3) 127 (4) 1023
6. How many 3-to-8 line decoders with an enable input are needed to construct a 6-to-64 line decoder without using any other logic gates ?  
 (1) 7 (2) 8 (3) 9 (4) 10
7. The values of  $x$  and  $y$ , if  $(x567)_8 + (2yx5)_8 = (71yx)_8$  is :  
 (1) 4, 3 (2) 3, 3 (3) 4, 4 (4) 4, 5
8. A computer uses a floating-point representation comprising a signed magnitude fractional mantissa and an excess-16 base-8 exponent. What decimal number is represented by a floating-point number whose exponent is 10011, mantissa 101000, and the sign bit set ?  
 (1) - 6250 (2) -20480 (3) - 320 (4) - 0.00122
9. The following program fragment in C  
 for ( $i = 3$ );  $i < 15$ ;  $i += 3$ );  
 printf("%d",  $i$ );  
 results in :  
 (1) a syntax error (2) an execution error  
 (3) printing of 12 (4) printing of 15

10. The body of the following for loop  
for (putchar ('a'); putchar(0); putchar('c'))  
putchar ('b');  
will be executed :
- (1) 0 times
  - (2) 1 times
  - (3) Infinitely many times
  - (4) will not be executed because of syntax error
11. Traffic intensity is expressed in :
- (1) Erlangs
  - (2) Erlangs/MHz/km
  - (3)  $\lambda$ /sec
  - (4) dB/sec
12. Guard band is ?
- (1) The channel spectrum
  - (2) The bandwidth allotted to signal
  - (3) The small unused bandwidth between the frequency channels to avoid interference
  - (4) The spectrum acquired by the noise between signals
13. OLE stands for :
- (1) Open Linking and Embedding
  - (2) Objective Linking and Embedding
  - (3) Object Linking and Embedding
  - (4) Open Link and End
14. What does ERP stand for ?
- (1) Expanse Research Project
  - (2) Enterprise Resource Planning
  - (3) Enterprise Research Planning
  - (4) Expanse Resource Project
15. Identify the correct sequence in which the following packets are transmitted on the network by a host when a browser requests a webpage from a remote server, assuming that the host has just been restarted ?
- (1) HTTP GET request, DNS query, TCP SYN
  - (2) DNS query, HTTP GET request, , TCP SYN
  - (3) TCP SYN, DNS query, HTTP GET request
  - (4) DNS query, TCP SYN, HTTP GET request

16. Standard protocols like HTTP, SMTP, MNTP are part of :
- (1) Presentation layer
  - (2) Application layer
  - (3) Session layer
  - (4) Not part of any layer
17. The representation of the value of a 16-bit unsigned integer X in hexadecimal number system is BCA9. The representation of the value of X in Octal number system is :
- (1) 136251
  - (2) 571244
  - (3) 736251
  - (4) 571247
18. In data flow diagram, an originator or receiver of data is usually designed by :
- (1) Circle
  - (2) Arrow
  - (3) Rectangle
  - (4) Square box
19. Consider the following function implemented in C :
- ```
void print xy(int x, int y)
{
    int * ptr;
    x = 0;
    ptr = &x;
    y = *ptr;
    *ptr = 1;
    print f("%d%d", x, y);
}
```
- the output of invoking print xy (1, 1) is :
- (1) 0, 0
  - (2) 0, 1
  - (3) 1, 0
  - (4) 1, 1
20. Linked lists of NULL pointers to signal :
- (1) end of list
  - (2) start of list
  - (3) Either (1) or (2)
  - (4) Neither (1) nor (2)
21. Semaphore operations are atomic because they are implemented within the ..... :
- (1) Kernel
  - (2) Shell
  - (3) User process
  - (4) Normal process space
22. Which of the following scheduling algorithms could result in saturation ?
- (1) First Come First Served
  - (2) Shortest Job First
  - (3) Round Robin
  - (4) Highest Response Ratio Next

23. The maximum number of processes that can be in ready state for a computer system with  $n$  CPUs is :
- (1)  $n$                       (2)  $n^2$                       (3)  $2^n$                       (4) Independent of  $n$
24. In which of the following page replacement policies, Belady's anomaly may occur ?
- (1) FIFO                      (2) Optimal                      (3) LRU                      (4) MRU
25. Maximum data rate of channel for a noiseless 3-KHz binary channel is :
- (1) 3000 bps                      (2) 6000 bps                      (3) 1500 bps                      (4) None of the above
26. The Hamming distance between 001111 and 010011 is :
- (1) 1                      (2) 2                      (3) 3                      (4) 4
27. There are 5 routers and 6 networks in an interworking, using link state routing, how many routing tables are there ?
- (1) 1                      (2) 5                      (3) 6                      (4) 11
28. Congestion control for multicasting flows from multiple sources to multiple destinations, the solution that can handle this is :
- (1) RSVP                      (2) Load shedding  
(3) Both (1) and (2)                      (4) None of these
29. Which one of the following protocols is *not* used to resolve one form of address to another one ?
- (1) DNS                      (2) ARP                      (3) DHCP                      (4) RARP
30. Consider the given IP address 156.216.24.65 with a subnet mark of 7-bits, what are the number of hosts and subnets ?
- (1) 512, 128                      (2) 510, 126                      (3) 511, 127                      (4) 509, 125
31. Consider the grammar
- $S \rightarrow a$   
 $S \rightarrow ab$
- The given grammar is :
- (1) LR (1) only                      (2) LL (1) only  
(3) Both LR (1) and LL (1)                      (4) LR (1) but not LL (1)



32. The FIRST and FOLLOW sets for the grammar :

$$S \rightarrow SS + | SS^* | a$$

(1)  $\text{FIRST}(S) = \{a\}$

$\text{FOLLOW}(S) = \{+, *, \$\}$

(3)  $\text{FIRST}(S) = \{a\}$

$\text{FOLLOW}(S) = \{+, *\}$

(2)  $\text{FIRST}(S) = \{+\}$

$\text{FOLLOW}(S) = \{+, *, \$\}$

(4)  $\text{FIRST}(S) = \{+, *\}$

$\text{FOLLOW}(S) = \{+, *, \$\}$

33. YACC builds up :

(1) SLR passing table

(2) Canonical LR passing table

(3) LALR passing table

(4) None of these

34. Resolution of externally defined symbols is performed by a :

(1) Linker

(2) Loader

(3) Compiler

(4) Interpreter

35. Consider the grammar :

$$S \rightarrow (S) | a$$

Let the number of states in SLR(1), LR(1) and LALR(1) passes for the grammar be  $n_1$ ,  $n_2$  and  $n_3$  respectively. The following relationship holds good :

(1)  $n_1 < n_2 < n_3$     (2)  $n_1 = n_3 < n_2$     (3)  $n_1 = n_2 = n_3$     (4)  $n_1 \geq n_3 \geq n_2$

36. Consider the following Syntax Directed Translation Scheme (SDTS) with non-terminals  $\{S, A\}$  and terminals  $\{a, b\}$

$$S \rightarrow aA \quad \{\text{print 1}\}$$

$$S \rightarrow a \quad \{\text{print 2}\}$$

$$A \rightarrow Sb \quad \{\text{print 3}\}$$

Using the above SDTS, the output printed by a bottom-up parser, for the input  $aab$  is :

(1) 132

(2) 223

(3) 231

(4) Syntax error

37. Replacing the expression  $2 * 3.14$  by  $6.28$  is :

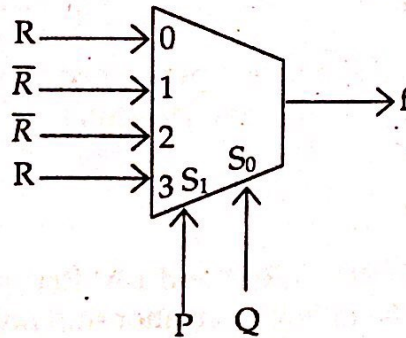
(1) Constant folding

(2) Induction variable

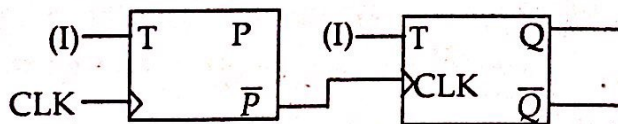
(3) Strength reduction

(4) Code reduction

38. The evaluation strategy which delays the evaluation of an expression until its value is needed and which avoids repeated evaluations is :
- (1) Early evaluation (2) Late evaluation  
(3) Lazy evaluation (4) Critical evaluation
39. In a two pass assembler the pseudo-code EQU is to be evaluated during :
- (1) pass 1 (2) pass 2  
(3) not evaluated by the assembler (4) None of the above
40. A compiler-compiler is a :
- (1) compiler which compiles a compiler program  
(2) software tool used in automatic generation of a compiler  
(3) compiler written in the same language it compiles  
(4) another name for cross compiler
41. The Boolean expression for the output  $f$  of the multiplexer shown below is :



- (1)  $\overline{P \oplus Q \oplus R}$  (2)  $P \oplus Q \oplus R$  (3)  $P + Q + R$  (4)  $\overline{P + Q + R}$
42. A 4-bit MOD-16 ripple counter uses JK flip-flops. If the propagation delay of each flip-flop is 50 ns sec, the maximum clock frequency that can be used is equal to :
- (1) 2 MHz (2) 3 MHz (3) 5 MHz (4) 20 MHz
43. For a given counter identify its behaviour :



The output is taken from PQ

- (1) MOD-4 up counter (2) MOD-2 down counter  
(3) MOD-4 down counter (4) MOD-2 up counter

44. Consider the following two tables  $T_1$  and  $T_2$

$T_1$			$T_2$		
P	Q	R	A	B	C
11	a	6	11	b	7
16	b	9	26	c	4
26	a	7	11	b	6

What is the number tuples present in the result of algebraic expression ?

$$T_1 \bowtie_{(T_1.P = T_2.A)} T_2$$

- (1) 2                      (2) 3                      (3) 4                      (4) 5
45. Suppose  $R_1(A, B)$  and  $R_2(C, D)$  are two relation schemas. Let  $R_1$  and  $R_2$  be the corresponding relation instances. B is a foreign key that refers to C in  $R_2$ . If data in  $R_1$  and  $R_2$  satisfy referential integrity constraints, which of the following is true ?
- (1)  $\prod_B (R_1) - \prod_C (R_2) = \phi$   
 (2)  $\prod_C (R_2) - \prod_B (R_1) = \phi$   
 (3)  $\prod_B (R_1) - \prod_C (R_2) \neq \phi$   
 (4) Both (1) and (2)
46. The number of entities participating in the relationship is known as :
- (1) Maximum cardinality                      (2) Composite identifiers  
 (3) Degree    (4) None
47. Which one is correct ?
- (1) Primary Key  $\subset$  Super Key  $\subset$  Candidate Key  
 (2) Candidate Key  $\subset$  Super Key  $\subset$  Primary Key  
 (3) Super Key  $\subset$  Primary Key  $\subset$  Candidate Key  
 (4) Primary Key  $\subset$  Candidate Key  $\subset$  Super Key

48. For the given tables

A		B
X	Y	Y
a <sub>1</sub>	b <sub>1</sub>	b <sub>1</sub>
a <sub>2</sub>	b <sub>1</sub>	b <sub>2</sub>
a <sub>2</sub>	b <sub>2</sub>	
a <sub>1</sub>	b <sub>2</sub>	

$A \div B$  will return :

- (1) a<sub>1</sub>, a<sub>2</sub>                      (2) a<sub>1</sub>                      (3) a<sub>2</sub>                      (4) None of these
49. Consider the join of a relation  $A$  with a relation  $B$ . If  $A$  has  $m$  tuples and  $B$  has  $n$  tuples, then the maximum and minimum sizes of the join respectively are :
- (1)  $mn$  and  $m + n$                       (2)  $(m + n)$  and  $(m - n)$   
 (3)  $mn$  and  $m$                       (4)  $mn$  and 0

50. Which one is *not* a query language ?

- (1) SQL                      (2) QBE                      (3) My SQL                      (4) Data log

51. main( )

```
{
    int a = 5, b = 2;
    printf("%d", a+++b);
}
```

- (1) results in syntax error                      (2) prints 7  
 (3) prints 8                      (4) prints 5

52. The following program

```
main( )
{
    int abc ( );
    abc ( );
    (*abc) ( );
}

int abc ( )
{ print f ("come"); }
```

- (1) results in a completion error                      (2) prints come  
 (3) prints come come                      (4) results in a run time error

53. What does the following program print ?

```
#include <stdio.h>
main()
{
    inc (); inc (); inc ();
}
inc ()
{
    static int x;
    printf("%d", ++x);
}
```

- (1) 012
- (2) 123
- (3) prints 3 consecutive, but unpredictable numbers
- (4) prints 111

54. The expression  $4 + 6 / 3 * 2 - 2 + 7 \% 3$  evaluates to :

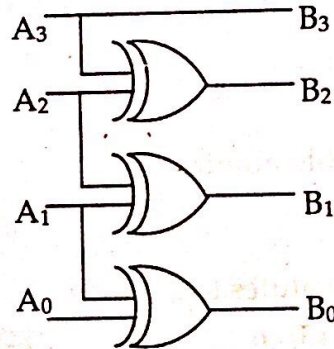
- (1) 3
- (2) 4
- (3) 6
- (4) 7

55. The following program fragment :

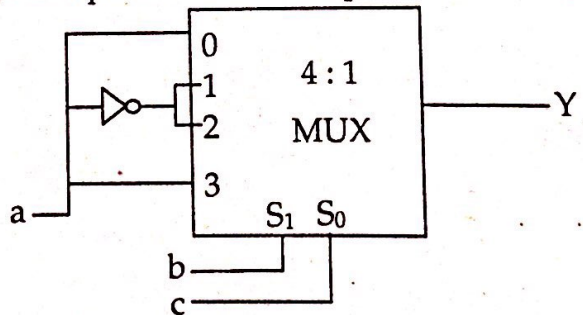
```
int i = 10;
void main ()
{
    int i = 20;
    {
        int i = 30;
        cout << i << :: i;
    }
}
```

- (1) prints 3010
- (2) prints 3020
- (3) will result in a run time error
- (4) None of the above

56. The statements  
`int a = 5;`  
`cont << "FIRST" >> (a << 2) << "SECOND";`  
 outputs :  
 (1) FIRST 52 SECOND (2) FIRST 20 SECOND  
 (3) SECOND 25 FIRST (4) an error message
57. Which of the following is not a storage class supported by C++ ?  
 (1) Register (2) Auto (3) Mutable (4) Dynamic
58. C front :  
 (1) is the front end of a C compiler  
 (2) is the preprocessor of a C compiler  
 (3) is a tool that translates a C++ code to its equivalent C code  
 (4) none of the above
59. The circuit is used to convert one code to another. Identify it :



- (1) Binary to Gray (2) Gray to Binary  
 (3) Gray to XS-3 (4) Gray to 8421
60. the following multiplexer circuit is equal to :



- (1) Implementation of sum equation of full adder  
 (2) Implementation of carry equation of full adder  
 (3) Implementation of borrow equation of full subtractor  
 (4) All of the above

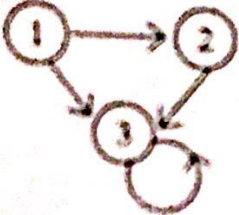
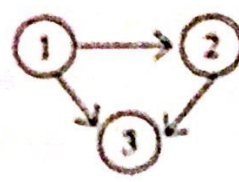
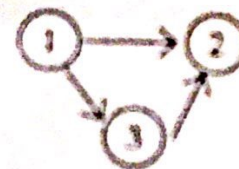
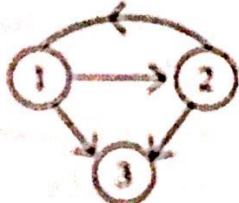
61. Consider the given relation and functional dependencies  $R(ABC)$   
 $FD = (AB \rightarrow C, C \rightarrow A)$   
 The relation is in which normal form ?  
 (1) 1 NF                      (2) 2 NF                      (3) 3 NF                      (4) BCNF
62. Consider the given functional dependencies :  
 $AB \rightarrow CD$   
 $AF \rightarrow D$   
 $DE \rightarrow F$   
 $C \rightarrow G$   
 $F \rightarrow E$   
 $G \rightarrow A$   
 Which one of the following is false ?  
 (1)  $\{CF\}^+ = \{ACDFEG\}$                       (2)  $\{BG\}^+ = \{ABCDG\}$   
 (3)  $\{AB\}^+ = \{ABCDG\}$                       (4)  $\{AF\}^+ = \{ACDEFG\}$
63. The maximum number of superkeys for the relation schema  $R(E, F, G, H)$  with  $E$  as the key is :  
 (1) 6                      (2) 7                      (3) 8                      (4) 9
64. A hash function  $f$  defined as  $f(\text{key}) = \text{key} \bmod 7$ , with linear probing, is used to insert the keys 37, 38, 72, 48, 98, 11, 56 into a table indexed from 0 to 6. What will be the location of key 11 ?  
 (1) 5                      (2) 6                      (3) 4                      (4) 3
65. Consider the following :  
 Block size = 1025 bytes  
 Record length in data file = 100 bytes  
 Total number of records = 30000  
 Search key = 9 bytes  
 Pointer = 6 bytes  
 What is the number of index blocks ?  
 (1) 44                      (2) 45                      (3) 46                      (4) None
66. A file is organized so that the ordering of data records is the same as or close to the ordering of data entries in some index. Then that index is called ?  
 (1) Dense                      (2) Sparse                      (3) Clustered                      (4) Unclustered

67.  $B^+$  trees are considered BALANCED because :
- (1) The lengths of the paths from the root to all leaf nodes are all equal
  - (2) The lengths of the paths from the root to all leaf nodes differ from each other by at most 1
  - (3) The number of children of any two non-leaf sibling nodes differ by at most 1
  - (4) The number of records in any two leaf nodes differ by at most 1
68. For merging two sorted lists of sizes  $m$  and  $n$  into a sorted list of size  $m + n$ , we require comparisons of :
- (1)  $O(m)$
  - (2)  $O(n)$
  - (3)  $O(m + n)$
  - (4)  $O(\log(m) + \log(n))$
69. A binary tree has  $n$  leaf nodes. The number of nodes of degree 2 in this tree is :
- (1)  $\log_2 n$
  - (2)  $n - 1$
  - (3)  $n$
  - (4)  $2^n$
70. A binary search tree contains the values 1, 2, 3, 4, 5, 6, 7 and 8. The tree is traversed in preorder and the values are printed out. Which of the following sequences is a valid output ?
- (1) 53124786
  - (2) 53126487
  - (3) 53241678
  - (4) 53124768
71. Which of the following system software resides in main memory always ?
- (1) Text editor
  - (2) Assembler
  - (3) Linker
  - (4) Loader
72. Which of the following UNIX tools receives input only from the standard input ?
- (1) awk
  - (2) grep
  - (3) sed
  - (4) tr
73. The CC command makes a total of :
- (1) 1 pass
  - (2) 2 passes
  - (3) 4 passes
  - (4) 5 passes
74. The following C program
- ```
main()
{
    fork (); fork (*); print f ("yes");
}
```
- prints yes :
- (1) only once
  - (2) twice
  - (3) 4 times
  - (4) 8 times



75. Which of the following calls never returns an error ?  
 (1) getpid                      (2) fork                      (3) ioctl                      (4) open
76. The following sequence of commands `grep x * .c > mn &`  
`wc -l mn&`  
`rm mn&`  
 produces the same result as the single command :  
 (1) `grep x * .c | wc -l`                      (2) `wc -l < grep x * .c`  
 (3) `grep x *.c > wc -l`                      (4) None of the above
77. A process refers to 5 pages A, B, C, D and E in the order A; B; C; D; A; B; E; A; B; C; D; E. If the page replacement is FIFO, the number of pages which transfer with an empty internal store of 3 frames is :  
 (1) 8                      (2) 10                      (3) 9                      (4) 7
78. Which of the following is FALSE ?  
 (1) User level threads are not scheduled by the Kernel  
 (2) When a user level thread is blocked, all other threads of its processes are blocked  
 (3) Context switching between user level threads is faster than context switching between Kernel level threads  
 (4) Kernel level threads cannot share the code segment
79. A shared variable  $x$ , initialized to 0, is operated one by four concurrent processes W, X, Y, Z as follows :  
 Each of the processes W and X reads  $x$  from memory, increments by one, stores it to memory, and then terminates. Each of the processes Y and Z reads  $x$  from memory, decrements by two, stores it to memory, and then terminates. Each process before reading  $x$  invokes the P operation (i.e. wait) on a counting semaphore S and invokes the V operation (i.e. signal) on the semaphore S after storing  $x$  to memory. Semaphore S is initialized to 2.  
 What is the maximum possible value of  $x$  after all processes complete execution ?  
 (1) -2                      (2) -1                      (3) 1                      (4) 2

80. To avoid the race condition, the number of processes allowed in critical section is :  
 (1) 0 (2) 1 (3) 2 (4) 3
81. Let  $P, Q$  and  $R$  be three atomic propositional assertions. Let  $X$  denote  $(P \vee Q) \rightarrow R$  and  $Y$  denote  $(P \rightarrow R) \vee (Q \rightarrow R)$ . Which one of the following is a tautology ?  
 (1)  $X \leftrightarrow Y$  (2)  $Y \rightarrow X$  (3)  $X \rightarrow Y$  (4)  $\sim Y \rightarrow X$
82. Which one of the following well-formed formulae in predicate calculus is *not* valid ?  
 (1)  $(\forall x p(x) \Rightarrow \forall x q(x)) \Rightarrow (\exists x \sim p(x) \vee \forall x q(x))$   
 (2)  $(\exists x p(x) \vee \exists x q(x)) \Rightarrow \exists x (p(x) \vee q(x))$   
 (3)  $\exists x (p(x) \wedge q(x)) \Rightarrow (\exists x p(x) \wedge \exists x q(x))$   
 (4)  $\forall x (p(x) \vee q(x)) \Rightarrow (\forall x p(x) \vee \forall x q(x))$
83. Akshay speaks the truth in 45% of the cases. In a rainy season, on each day there is a 75% chance of raining. On a certain day in the rainy season, Akshay tells his mother that it is raining outside. What is the probability that it is actually raining ?  
 (1)  $\frac{27}{38}$  (2)  $\frac{25}{35}$  (3)  $\frac{31}{36}$  (4)  $\frac{52}{128}$
84. Two  $n$  bit binary strings  $S_1$  and  $S_2$  are chosen randomly with uniform probability. The probability that Hamming distance between these strings (the number of bit positions where the two strings differ) is equal to  $d$  is :  
 (1)  $\frac{{}^nC_d}{2^n}$  (2)  $\frac{{}^nC_d}{2^d}$  (3)  $\frac{d}{2^n}$  (4)  $\frac{1}{2^d}$
85.  $f(x)$  and  $g(x)$  are two functions differentiable in  $[0, 1]$  such that  $f(0) = 2; g(0) = 0; f(1) = 6; \text{ and } g(1) = 2$ . Then there must exist a constant  $C$  in :  
 (1)  $(0, 1)$  such that  $f'(c) = 2g'(c)$  (2)  $[0, 1]$  such that  $f'(c) = 2g'(c)$   
 (3)  $(0, 1)$  such that  $2f'(c) = g'(c)$  (4)  $[0, 1]$  such that  $2f'(c) = g'(c)$
86.  $(G, *)$  is an abelian group. Then :  
 (1)  $x = x^{-1}$ , for any  $x$  belonging to  $G$   
 (2)  $x = x^2$ , for any  $x$  belonging to  $G$   
 (3)  $(x * y)^2 = x^2 * y^2$ , for any  $x, y$  belonging to  $G$   
 (4)  $G$  is of finite order
87. The number of equivalence relations of the set  $[1, 2, 3, 4]$  is :  
 (1) 15 (2) 16 (3) 24 (4) 4

88. In a set of integers, a relation  $R$  is defined as  $aRb$ , if and only if  $b = |a|$ . This relation is :  
 (1) Reflexive (2) Irreflexive (3) Symmetric (4) Anti-symmetric
89. Which of the following statements is true ?  
 P: All totally ordered sets have least elements.  
 Q: The Hasse diagram of a totally ordered set is a line.  
 (1) P alone (2) Q alone (3) Both P and Q (4) Neither P nor Q
90. Let  $M$  be a  $3 \times 3$  adjacency matrix corresponding to a given graph of three nodes labeled 1, 2, 3. If entry  $(1, 3)$  in  $M^3$  is 2, then the graph could be :
- (1) 
- (2) 
- (3) 
- (4) 
91. In an encryption scheme that uses RSA, values for  $p$  and  $q$  are selected to be 5 and 7 respectively. What could be the value of  $d$  ?  
 (1) 12 (2) 3 (3) 11 (4) 9
92. What is the size of key in triple DES ?  
 (1) 168 bits (2) 112 bits (3) 56 bits (4) Either (1) or (2) or (3)
93. Which one of the following is *not* desired in a good SRS document ?  
 (1) Functional requirements (2) Non-functional requirements  
 (3) Goals of implementation (4) Algorithms for software implementation
94. According to Brooks, adding more people to an already late software project makes it :  
 (1) late (2) fast  
 (3) does not impact schedule (4) None of the above
95. For a real time software the KLOC is 28.2, what is the effort in person month calculated by using basic COCOMO model ?  
 (1) 146 (2) 198 (3) 220 (4) 248

96. Register renaming is done in pipelined processors :
- (1) as an alternative to register allocation at compile time
  - (2) for efficient access to function parameters and local variables.
  - (3) to handle certain kinds of hazards
  - (4) as part of address translation
97. EDI over Internet uses :
- (1) MIME to attach EDI forms to e-mail messages
  - (2) FTP to send business forms
  - (3) HTTP to send business forms
  - (4) SGML to send business forms
98. In electronic cash payment :
- (1) A debit card payment system is used
  - (2) A credit card payment system is used
  - (3) RSA cryptography is used in transactions
  - (4) A customer buys several electronic coins which are digitally signed by coin issuing bank
99. Commonly used mode for 3G networks is :
- (1) TDMA
  - (2) FDMA
  - (3) FDD
  - (4) TDD
100. The shape of the cellular region for maximum radio coverage is :
- (1) Circular
  - (2) Square
  - (3) Oval
  - (4) Hexagon

M. Phil/ PhD/URS Entrance Examination Answer Key

| Sr. No. | Set-A | Set-B | Set-C | Set-D |
|---------|-------|-------|-------|-------|
| 1       | C     | A     | C     | A     |
| 2       | D     | B     | D     | C     |
| 3       | A     | D     | C     | B     |
| 4       | A     | A     | A     | A     |
| 5       | A     | B     | B     | D     |
| 6       | C     | C     | C     | C     |
| 7       | A     | B     | A     | A     |
| 8       | D     | A     | C     | C     |
| 9       | B     | C     | B     | D     |
| 10      | A     | B     | D     | A     |
| 11      | A     | D     | B     | A     |
| 12      | C     | A     | C     | C     |
| 13      | B     | C     | B     | C     |
| 14      | A     | A     | D     | B     |
| 15      | D     | B     | A     | D     |
| 16      | C     | C     | B     | B     |
| 17      | A     | A     | D     | A     |
| 18      | C     | C     | C     | D     |
| 19      | D     | A     | A     | C     |
| 20      | A     | B     | A     | A     |
| 21      | B     | B     | C     | A     |
| 22      | C     | C     | D     | B     |
| 23      | B     | A     | A     | D     |
| 24      | D     | B     | A     | A     |
| 25      | A     | A     | A     | B     |
| 26      | B     | C     | C     | C     |
| 27      | D     | D     | A     | B     |
| 28      | C     | A     | D     | A     |
| 29      | A     | D     | B     | C     |
| 30      | A     | C     | A     | B     |
| 31      | B     | A     | A     | D     |
| 32      | C     | C     | C     | A     |
| 33      | A     | B     | C     | C     |
| 34      | B     | A     | B     | A     |
| 35      | A     | D     | D     | B     |
| 36      | C     | C     | B     | C     |
| 37      | D     | A     | A     | A     |
| 38      | A     | C     | D     | C     |
| 39      | D     | D     | C     | A     |
| 40      | C     | A     | A     | B     |
| 41      | C     | A     | D     | B     |
| 42      | D     | C     | D     | C     |
| 43      | C     | C     | D     | A     |
| 44      | A     | B     | C     | B     |
| 45      | B     | D     | A     | A     |
| 46      | C     | B     | D     | C     |
| 47      | A     | A     | C     | D     |
| 48      | C     | D     | D     | A     |
| 49      | B     | C     | D     | D     |
| 50      | D     | A     | B     | C     |

M. Phil/ PhD/URS Entrance Examination Answer Key

| Sr. No. | Set-A | Set-B | Set-C | Set-D |
|---------|-------|-------|-------|-------|
| 51      | D     | D     | B     | B     |
| 52      | A     | D     | C     | C     |
| 53      | C     | D     | A     | B     |
| 54      | A     | C     | B     | D     |
| 55      | B     | A     | A     | A     |
| 56      | C     | D     | C     | B     |
| 57      | A     | C     | D     | D     |
| 58      | C     | D     | A     | C     |
| 59      | A     | D     | D     | A     |
| 60      | B     | B     | C     | A     |
| 61      | D     | C     | A     | C     |
| 62      | D     | D     | B     | D     |
| 63      | D     | D     | D     | C     |
| 64      | C     | A     | A     | A     |
| 65      | A     | B     | B     | B     |
| 66      | D     | C     | C     | C     |
| 67      | C     | A     | B     | A     |
| 68      | D     | D     | A     | C     |
| 69      | D     | C     | C     | B     |
| 70      | B     | D     | B     | D     |
| 71      | A     | C     | C     | D     |
| 72      | B     | D     | D     | D     |
| 73      | D     | C     | D     | D     |
| 74      | A     | A     | A     | C     |
| 75      | B     | B     | B     | A     |
| 76      | C     | C     | C     | D     |
| 77      | B     | A     | A     | C     |
| 78      | A     | C     | D     | D     |
| 79      | C     | B     | C     | D     |
| 80      | B     | D     | D     | B     |
| 81      | C     | B     | A     | C     |
| 82      | D     | C     | C     | D     |
| 83      | D     | B     | B     | A     |
| 84      | A     | D     | A     | A     |
| 85      | B     | A     | D     | A     |
| 86      | C     | B     | C     | C     |
| 87      | A     | D     | A     | A     |
| 88      | D     | C     | C     | D     |
| 89      | C     | A     | D     | B     |
| 90      | D     | A     | A     | A     |
| 91      | A     | C     | D     | C     |
| 92      | C     | D     | A     | D     |
| 93      | C     | A     | C     | D     |
| 94      | B     | A     | A     | A     |
| 95      | D     | A     | B     | B     |
| 96      | B     | C     | C     | C     |
| 97      | A     | A     | A     | A     |
| 98      | D     | D     | C     | D     |
| 99      | C     | B     | A     | C     |
| 100     | A     | A     | B     | D     |

*m*  
16.11.18

*Man*  
16/11/18

*Abh*  
16/11/18

*Pali*  
16/11/18